

Math For Me:
Review Grades 1 & 2



This book belongs to:

Math For Me:

Review Grades 1 & 2

© 2020 All rights reserved by Abby Hinojos.

*No part of this publication may be reproduced, or
transmitted in any form or by any means.*

MATH FOR ME: REVIEW GRADES 1 & 2

Note to parents:


Thank you for buying this workbook, I made it for my own children and wanted to share. Kids will review basic math concepts learned from 1st grade through 2nd grade. Use it as a guide and play as much as you can.

I hope you and your children enjoy it.

Abby.

100 Days of school



Color 5 rabbits blue. Color the other 5 red. How many rabbits do you have in all?



5 blue rabbits
+ 5 red rabbits




Color 3 cupcakes yellow. Color the other 5 pink. How many cupcakes do you have in all?



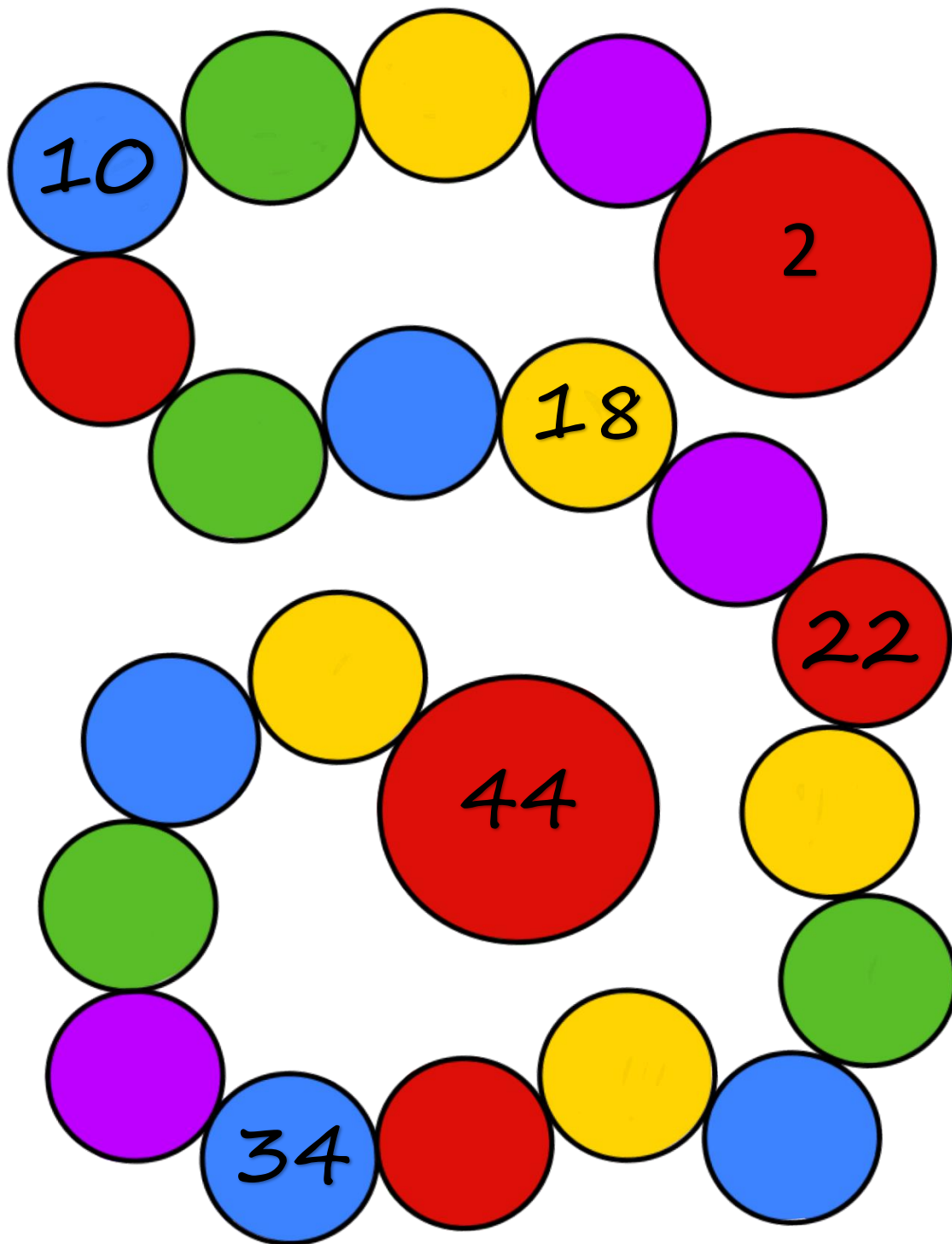
3 yellow cupcakes
+ 5 pink cupcakes

Count from 1 to 100.


1	2	3	4	5	6	7	8	9	10
11	12	13	14	15	16	17	18	19	20
21	22	23	24	25	26	27	28	29	30
31	32	33	34	35	36	37	38	39	40
41	42	43	44	45	46	47	48	49	50
51	52	53	54	55	56	57	58	59	60
61	62	63	64	65	66	67	68	69	70
71	72	73	74	75	76	77	78	79	80
81	82	83	84	85	86	87	88	89	90
91	92	93	94	95	96	97	98	99	100




Counting by 2's. Write the missing numbers.



Solve the problems.




$\begin{array}{r} 1 \\ +1 \\ \hline \end{array}$	$\begin{array}{r} 1 \\ +2 \\ \hline \end{array}$	$\begin{array}{r} 1 \\ +3 \\ \hline \end{array}$	$\begin{array}{r} 1 \\ +4 \\ \hline \end{array}$
$\begin{array}{r} 1 \\ +5 \\ \hline \end{array}$	$\begin{array}{r} 1 \\ +6 \\ \hline \end{array}$	$\begin{array}{r} 1 \\ +7 \\ \hline \end{array}$	$\begin{array}{r} 1 \\ +8 \\ \hline \end{array}$
$\begin{array}{r} 1 \\ +9 \\ \hline \end{array}$	$\begin{array}{r} 1 \\ +10 \\ \hline \end{array}$	$\begin{array}{r} 2 \\ +1 \\ \hline \end{array}$	$\begin{array}{r} 2 \\ +2 \\ \hline \end{array}$
$\begin{array}{r} 2 \\ +3 \\ \hline \end{array}$	$\begin{array}{r} 2 \\ +4 \\ \hline \end{array}$	$\begin{array}{r} 2 \\ +5 \\ \hline \end{array}$	$\begin{array}{r} 2 \\ +6 \\ \hline \end{array}$
$\begin{array}{r} 2 \\ +7 \\ \hline \end{array}$	$\begin{array}{r} 2 \\ +8 \\ \hline \end{array}$	$\begin{array}{r} 2 \\ +9 \\ \hline \end{array}$	$\begin{array}{r} 2 \\ +10 \\ \hline \end{array}$






$\begin{array}{r} 3 \\ +1 \\ \hline \end{array}$	$\begin{array}{r} 3 \\ +2 \\ \hline \end{array}$	$\begin{array}{r} 3 \\ +3 \\ \hline \end{array}$	$\begin{array}{r} 3 \\ +4 \\ \hline \end{array}$
$\begin{array}{r} 3 \\ +5 \\ \hline \end{array}$	$\begin{array}{r} 3 \\ +6 \\ \hline \end{array}$	$\begin{array}{r} 3 \\ +7 \\ \hline \end{array}$	$\begin{array}{r} 3 \\ +8 \\ \hline \end{array}$
$\begin{array}{r} 3 \\ +9 \\ \hline \end{array}$	$\begin{array}{r} 3 \\ +10 \\ \hline \end{array}$	$\begin{array}{r} 4 \\ +1 \\ \hline \end{array}$	$\begin{array}{r} 4 \\ +2 \\ \hline \end{array}$
$\begin{array}{r} 4 \\ +3 \\ \hline \end{array}$	$\begin{array}{r} 4 \\ +4 \\ \hline \end{array}$	$\begin{array}{r} 4 \\ +5 \\ \hline \end{array}$	$\begin{array}{r} 4 \\ +6 \\ \hline \end{array}$
$\begin{array}{r} 4 \\ +7 \\ \hline \end{array}$	$\begin{array}{r} 4 \\ +8 \\ \hline \end{array}$	$\begin{array}{r} 4 \\ +9 \\ \hline \end{array}$	$\begin{array}{r} 4 \\ +10 \\ \hline \end{array}$

	$\begin{array}{r} 5 \\ +1 \\ \hline \end{array}$	$\begin{array}{r} 5 \\ +2 \\ \hline \end{array}$	$\begin{array}{r} 5 \\ +3 \\ \hline \end{array}$
$\begin{array}{r} 5 \\ +4 \\ \hline \end{array}$	$\begin{array}{r} 5 \\ +5 \\ \hline \end{array}$	$\begin{array}{r} 5 \\ +6 \\ \hline \end{array}$	$\begin{array}{r} 5 \\ +7 \\ \hline \end{array}$
$\begin{array}{r} 5 \\ +8 \\ \hline \end{array}$	$\begin{array}{r} 5 \\ +9 \\ \hline \end{array}$	$\begin{array}{r} 5 \\ +10 \\ \hline \end{array}$	



Add and write the answers on the table.

+	1	2	3	4	5
1					
2					
3					
4					
5					



Add.

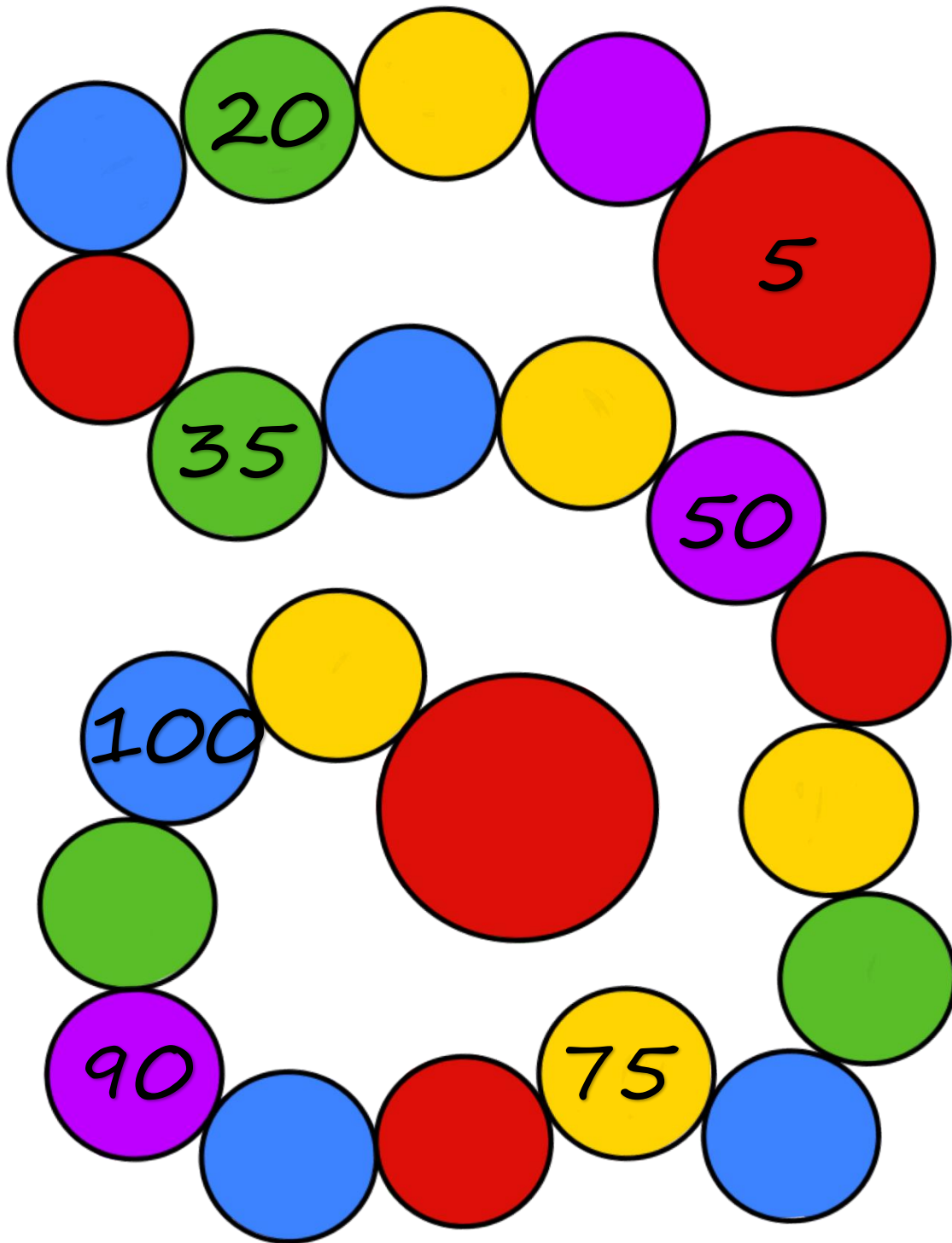
4	+	1	=			0	+	6	=	
+		+		+		+		+		+
3	+	2	=				+	1	=	4
=		=		=		=		=		=
	+		=			3	+		=	



6 <u>+1</u>	6 <u>+2</u>	6 <u>+3</u>	6 <u>+4</u>
6 <u>+5</u>	6 <u>+6</u>	6 <u>+7</u>	6 <u>+8</u>
6 <u>+9</u>	6 <u>+10</u>	7 <u>+1</u>	7 <u>+2</u>
7 <u>+3</u>	7 <u>+4</u>	7 <u>+5</u>	7 <u>+6</u>
7 <u>+7</u>	7 <u>+8</u>	7 <u>+9</u>	7 <u>+10</u>




Count by 5's. Write the missing numbers.






Throw 2 dice and add.


	+		=	
	+		=	
	+		=	
	+		=	
	+		=	



8 <u>+1</u>	8 <u>+2</u>	8 <u>+3</u>	8 <u>+4</u>
8 <u>+5</u>	8 <u>+6</u>	8 <u>+7</u>	8 <u>+8</u>
8 <u>+9</u>	8 <u>+10</u>	9 <u>+1</u>	9 <u>+2</u>
9 <u>+3</u>	9 <u>+4</u>	9 <u>+5</u>	9 <u>+6</u>
9 <u>+7</u>	9 <u>+8</u>	9 <u>+9</u>	9 <u>+10</u>




	$\begin{array}{r} 10 \\ +1 \\ \hline \end{array}$	$\begin{array}{r} 10 \\ +2 \\ \hline \end{array}$	$\begin{array}{r} 10 \\ +3 \\ \hline \end{array}$
$\begin{array}{r} 10 \\ +4 \\ \hline \end{array}$	$\begin{array}{r} 10 \\ +5 \\ \hline \end{array}$	$\begin{array}{r} 10 \\ +6 \\ \hline \end{array}$	$\begin{array}{r} 10 \\ +7 \\ \hline \end{array}$
$\begin{array}{r} 10 \\ +8 \\ \hline \end{array}$	$\begin{array}{r} 10 \\ +9 \\ \hline \end{array}$	$\begin{array}{r} 10 \\ +10 \\ \hline \end{array}$	



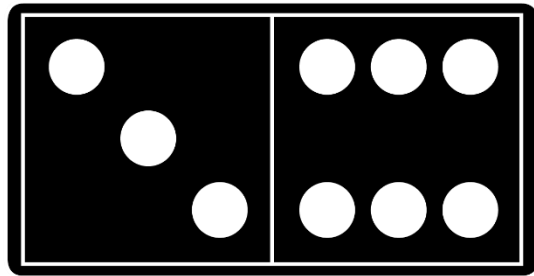
Add and write the answers on the table.

+	1	2	3	4	5	6	7	8	9	10
1										
2										
3										
4										
5										
6										
7										
8										
9										
10										

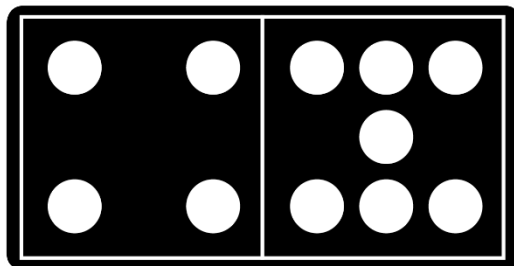
Addition Domino.



	+		=	
--	---	--	---	--

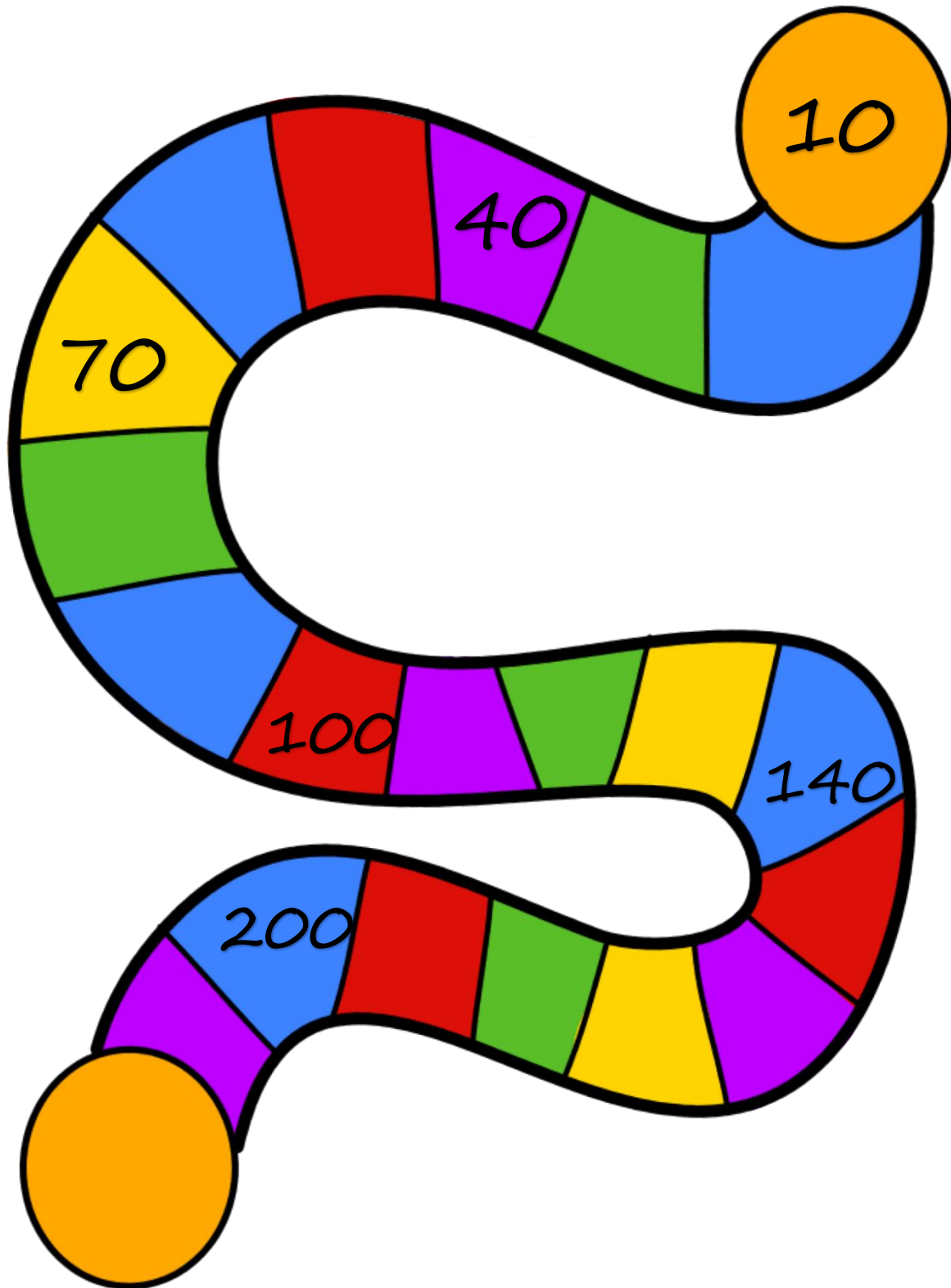


	+		=	
--	---	--	---	--


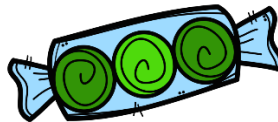








	+		=	
--	---	--	---	--

Count by 10's. Write the missing numbers.











Tally and graph.

										
										
										
										
	1	2	3	4	5	6	7	8	9	10

Tally and graph.


			
			

										
										
										
										
	1	2	3	4	5	6	7	8	9	10




Write the correct number of hundreds, tens, and ones.

	Hundreds	Tens	Ones
937			
756			
394			
700			

Add.

$6 + 5 = \underline{\quad}$		$6 + 3 = \underline{\quad}$
$2 + 7 = \underline{\quad}$		$7 + 8 = \underline{\quad}$
$8 + 4 = \underline{\quad}$		$3 + 2 = \underline{\quad}$
$3 + 1 = \underline{\quad}$		$4 + 7 = \underline{\quad}$
$6 + 4 = \underline{\quad}$		$1 + 8 = \underline{\quad}$
$4 + 3 = \underline{\quad}$		$3 + 5 = \underline{\quad}$
$5 + 5 = \underline{\quad}$		$6 + 7 = \underline{\quad}$

Add.

 <u> </u>	$\begin{array}{r} 1 \\ +0 \\ \hline \end{array}$	$\begin{array}{r} 2 \\ +5 \\ \hline \end{array}$
$\begin{array}{r} 2 \\ +0 \\ \hline \end{array}$	$\begin{array}{r} 2 \\ +3 \\ \hline \end{array}$	$\begin{array}{r} 1 \\ +2 \\ \hline \end{array}$
$\begin{array}{r} 1 \\ +5 \\ \hline \end{array}$	$\begin{array}{r} 1 \\ +1 \\ \hline \end{array}$	$\begin{array}{r} 2 \\ +7 \\ \hline \end{array}$
$\begin{array}{r} 1 \\ +8 \\ \hline \end{array}$	 <u> </u>	$\begin{array}{r} 1 \\ +6 \\ \hline \end{array}$
$\begin{array}{r} 2 \\ +8 \\ \hline \end{array}$	$\begin{array}{r} 2 \\ +2 \\ \hline \end{array}$	$\begin{array}{r} 2 \\ +4 \\ \hline \end{array}$
$\begin{array}{r} 1 \\ +3 \\ \hline \end{array}$	$\begin{array}{r} 1 \\ +4 \\ \hline \end{array}$	$\begin{array}{r} 2 \\ +1 \\ \hline \end{array}$
$\begin{array}{r} 2 \\ +6 \\ \hline \end{array}$	$\begin{array}{r} 1 \\ +7 \\ \hline \end{array}$	 <u> </u>

Write the numbers in standard form.

$$600 + 50 + 3 = \underline{\hspace{2cm}}$$

$$800 + 20 + 6 = \underline{\hspace{2cm}}$$

$$100 + 70 + 1 = \underline{\hspace{2cm}}$$




$$300 + 80 + 9 = \underline{\hspace{2cm}}$$

$$400 + 60 + 2 = \underline{\hspace{2cm}}$$

Practice addition.

4	+	3	=			2	+	4	=	
+		+		+		+		+		+
1	+	5	=				+	3	=	4
=		=		=		=		=		=
	+		=			3	+		=	

Add.

 <u> </u>	$\begin{array}{r} 4 \\ +0 \\ \hline \end{array}$	$\begin{array}{r} 3 \\ +5 \\ \hline \end{array}$
$\begin{array}{r} 3 \\ +0 \\ \hline \end{array}$	$\begin{array}{r} 3 \\ +3 \\ \hline \end{array}$	$\begin{array}{r} 4 \\ +2 \\ \hline \end{array}$
$\begin{array}{r} 4 \\ +5 \\ \hline \end{array}$	$\begin{array}{r} 4 \\ +1 \\ \hline \end{array}$	$\begin{array}{r} 3 \\ +7 \\ \hline \end{array}$
$\begin{array}{r} 4 \\ +8 \\ \hline \end{array}$	 <u> </u>	$\begin{array}{r} 4 \\ +6 \\ \hline \end{array}$
$\begin{array}{r} 3 \\ +8 \\ \hline \end{array}$	$\begin{array}{r} 3 \\ +2 \\ \hline \end{array}$	$\begin{array}{r} 3 \\ +4 \\ \hline \end{array}$
$\begin{array}{r} 4 \\ +3 \\ \hline \end{array}$	$\begin{array}{r} 4 \\ +4 \\ \hline \end{array}$	$\begin{array}{r} 3 \\ +1 \\ \hline \end{array}$
$\begin{array}{r} 3 \\ +6 \\ \hline \end{array}$	$\begin{array}{r} 4 \\ +7 \\ \hline \end{array}$	 <u> </u>

Write the numbers in standard form.

$$900 + 90 + 9 = \underline{\hspace{2cm}}$$

$$700 + 30 + 8 = \underline{\hspace{2cm}}$$

$$500 + 80 + 0 = \underline{\hspace{2cm}}$$




$$200 + 20 + 6 = \underline{\hspace{2cm}}$$

$$300 + 70 + 4 = \underline{\hspace{2cm}}$$




Write the correct number of hundreds, tens, and ones.

	Hundreds	Tens	Ones
739			
481			
620			
647			


Add.





 <u> </u>	$\begin{array}{r} 6 \\ +0 \\ \hline \end{array}$	$\begin{array}{r} 5 \\ +5 \\ \hline \end{array}$
$\begin{array}{r} 5 \\ +0 \\ \hline \end{array}$	$\begin{array}{r} 5 \\ +3 \\ \hline \end{array}$	$\begin{array}{r} 6 \\ +2 \\ \hline \end{array}$
$\begin{array}{r} 6 \\ +5 \\ \hline \end{array}$	$\begin{array}{r} 6 \\ +1 \\ \hline \end{array}$	$\begin{array}{r} 5 \\ +7 \\ \hline \end{array}$
$\begin{array}{r} 6 \\ +8 \\ \hline \end{array}$	 <u> </u>	$\begin{array}{r} 6 \\ +6 \\ \hline \end{array}$
$\begin{array}{r} 5 \\ +8 \\ \hline \end{array}$	$\begin{array}{r} 5 \\ +2 \\ \hline \end{array}$	$\begin{array}{r} 5 \\ +4 \\ \hline \end{array}$
$\begin{array}{r} 6 \\ +3 \\ \hline \end{array}$	$\begin{array}{r} 6 \\ +4 \\ \hline \end{array}$	$\begin{array}{r} 5 \\ +1 \\ \hline \end{array}$
$\begin{array}{r} 5 \\ +6 \\ \hline \end{array}$	$\begin{array}{r} 6 \\ +7 \\ \hline \end{array}$	 <u> </u>

Add.

 <hr/>	$\begin{array}{r} 7 \\ +0 \\ \hline \end{array}$	$\begin{array}{r} 8 \\ +5 \\ \hline \end{array}$
$\begin{array}{r} 8 \\ +0 \\ \hline \end{array}$	$\begin{array}{r} 8 \\ +3 \\ \hline \end{array}$	$\begin{array}{r} 7 \\ +2 \\ \hline \end{array}$
$\begin{array}{r} 7 \\ +5 \\ \hline \end{array}$	$\begin{array}{r} 7 \\ +1 \\ \hline \end{array}$	$\begin{array}{r} 8 \\ +7 \\ \hline \end{array}$
$\begin{array}{r} 7 \\ +8 \\ \hline \end{array}$	 <hr/>	$\begin{array}{r} 7 \\ +6 \\ \hline \end{array}$
$\begin{array}{r} 8 \\ +8 \\ \hline \end{array}$	$\begin{array}{r} 8 \\ +2 \\ \hline \end{array}$	$\begin{array}{r} 8 \\ +4 \\ \hline \end{array}$
$\begin{array}{r} 7 \\ +3 \\ \hline \end{array}$	$\begin{array}{r} 7 \\ +4 \\ \hline \end{array}$	$\begin{array}{r} 8 \\ +1 \\ \hline \end{array}$
$\begin{array}{r} 8 \\ +6 \\ \hline \end{array}$	$\begin{array}{r} 7 \\ +7 \\ \hline \end{array}$	 <hr/>

Complete the graph.




5				
4				
3				
2				
1				
				

How many cupcakes are there? _____

How many apples are there? _____



Count the rabbits. If you color 5 rabbits blue, how many white rabbits are left?



10 white rabbits
- 5 blue rabbits




Count the cupcakes. If you color 3 cupcakes yellow, how many white cupcakes are left?



8 white cupcakes
- 3 yellow cupcakes

Solve the problems.



$$4 - 2 =$$



$$4 - 1 =$$



$$5 - 2 =$$

Solve the problems.


$\begin{array}{r} 1 \\ -1 \\ \hline \end{array}$	$\begin{array}{r} 2 \\ -1 \\ \hline \end{array}$	$\begin{array}{r} 3 \\ -1 \\ \hline \end{array}$	$\begin{array}{r} 4 \\ -1 \\ \hline \end{array}$
$\begin{array}{r} 5 \\ -1 \\ \hline \end{array}$	$\begin{array}{r} 6 \\ -1 \\ \hline \end{array}$	$\begin{array}{r} 7 \\ -1 \\ \hline \end{array}$	$\begin{array}{r} 8 \\ -1 \\ \hline \end{array}$
$\begin{array}{r} 9 \\ -1 \\ \hline \end{array}$	$\begin{array}{r} 10 \\ -1 \\ \hline \end{array}$	$\begin{array}{r} 2 \\ -1 \\ \hline \end{array}$	$\begin{array}{r} 2 \\ -2 \\ \hline \end{array}$
$\begin{array}{r} 3 \\ -2 \\ \hline \end{array}$	$\begin{array}{r} 4 \\ -2 \\ \hline \end{array}$	$\begin{array}{r} 5 \\ -2 \\ \hline \end{array}$	$\begin{array}{r} 6 \\ -2 \\ \hline \end{array}$
$\begin{array}{r} 7 \\ -2 \\ \hline \end{array}$	$\begin{array}{r} 8 \\ -2 \\ \hline \end{array}$	$\begin{array}{r} 9 \\ -2 \\ \hline \end{array}$	$\begin{array}{r} 10 \\ -2 \\ \hline \end{array}$

Solve the problems.

$\begin{array}{r} 3 \\ -1 \\ \hline \end{array}$	$\begin{array}{r} 3 \\ -2 \\ \hline \end{array}$	$\begin{array}{r} 3 \\ -3 \\ \hline \end{array}$	$\begin{array}{r} 4 \\ -3 \\ \hline \end{array}$
$\begin{array}{r} 5 \\ -3 \\ \hline \end{array}$	$\begin{array}{r} 6 \\ -3 \\ \hline \end{array}$	$\begin{array}{r} 7 \\ -3 \\ \hline \end{array}$	$\begin{array}{r} 8 \\ -3 \\ \hline \end{array}$
$\begin{array}{r} 9 \\ -3 \\ \hline \end{array}$	$\begin{array}{r} 10 \\ -3 \\ \hline \end{array}$	$\begin{array}{r} 4 \\ -1 \\ \hline \end{array}$	$\begin{array}{r} 4 \\ -2 \\ \hline \end{array}$
$\begin{array}{r} 4 \\ -3 \\ \hline \end{array}$	$\begin{array}{r} 4 \\ -4 \\ \hline \end{array}$	$\begin{array}{r} 5 \\ -4 \\ \hline \end{array}$	$\begin{array}{r} 6 \\ -4 \\ \hline \end{array}$
$\begin{array}{r} 7 \\ -4 \\ \hline \end{array}$	$\begin{array}{r} 8 \\ -4 \\ \hline \end{array}$	$\begin{array}{r} 9 \\ -4 \\ \hline \end{array}$	$\begin{array}{r} 10 \\ -4 \\ \hline \end{array}$


Solve the problems.

	$\begin{array}{r} 5 \\ -1 \\ \hline \end{array}$	$\begin{array}{r} 5 \\ -2 \\ \hline \end{array}$	$\begin{array}{r} 5 \\ -3 \\ \hline \end{array}$
$\begin{array}{r} 5 \\ -4 \\ \hline \end{array}$	$\begin{array}{r} 5 \\ -5 \\ \hline \end{array}$	$\begin{array}{r} 6 \\ -5 \\ \hline \end{array}$	$\begin{array}{r} 7 \\ -5 \\ \hline \end{array}$
$\begin{array}{r} 8 \\ -5 \\ \hline \end{array}$	$\begin{array}{r} 9 \\ -5 \\ \hline \end{array}$	$\begin{array}{r} 10 \\ -5 \\ \hline \end{array}$	




Subtract and write the answers on the table.

-	5	4	3	2	1
1					
2					
3					
4					
5					



Subtract.

4	-	1	=	
-		-		-
2	-	1	=	
=		=		=
	-		=	



Throw 2 dice and subtract.

	-		=	
	-		=	
	-		=	
	-		=	
	-		=	



Solve the problems.


$\begin{array}{r} 6 \\ -1 \\ \hline \end{array}$	$\begin{array}{r} 6 \\ -2 \\ \hline \end{array}$	$\begin{array}{r} 6 \\ -3 \\ \hline \end{array}$	$\begin{array}{r} 6 \\ -4 \\ \hline \end{array}$
$\begin{array}{r} 6 \\ -5 \\ \hline \end{array}$	$\begin{array}{r} 6 \\ -6 \\ \hline \end{array}$	$\begin{array}{r} 7 \\ -6 \\ \hline \end{array}$	$\begin{array}{r} 8 \\ -6 \\ \hline \end{array}$
$\begin{array}{r} 9 \\ -6 \\ \hline \end{array}$	$\begin{array}{r} 10 \\ -6 \\ \hline \end{array}$	$\begin{array}{r} 7 \\ -1 \\ \hline \end{array}$	$\begin{array}{r} 7 \\ -2 \\ \hline \end{array}$
$\begin{array}{r} 7 \\ -3 \\ \hline \end{array}$	$\begin{array}{r} 7 \\ -4 \\ \hline \end{array}$	$\begin{array}{r} 7 \\ -5 \\ \hline \end{array}$	$\begin{array}{r} 7 \\ -6 \\ \hline \end{array}$
$\begin{array}{r} 7 \\ -7 \\ \hline \end{array}$	$\begin{array}{r} 8 \\ -7 \\ \hline \end{array}$	$\begin{array}{r} 9 \\ -7 \\ \hline \end{array}$	$\begin{array}{r} 10 \\ -7 \\ \hline \end{array}$

Solve the problems.

$\begin{array}{r} 8 \\ -1 \\ \hline \end{array}$	$\begin{array}{r} 8 \\ -2 \\ \hline \end{array}$	$\begin{array}{r} 8 \\ -3 \\ \hline \end{array}$	$\begin{array}{r} 8 \\ -4 \\ \hline \end{array}$
$\begin{array}{r} 8 \\ -5 \\ \hline \end{array}$	$\begin{array}{r} 8 \\ -6 \\ \hline \end{array}$	$\begin{array}{r} 8 \\ -7 \\ \hline \end{array}$	$\begin{array}{r} 8 \\ -8 \\ \hline \end{array}$
$\begin{array}{r} 9 \\ -8 \\ \hline \end{array}$	$\begin{array}{r} 10 \\ -8 \\ \hline \end{array}$	$\begin{array}{r} 9 \\ -1 \\ \hline \end{array}$	$\begin{array}{r} 9 \\ -2 \\ \hline \end{array}$
$\begin{array}{r} 9 \\ -3 \\ \hline \end{array}$	$\begin{array}{r} 9 \\ -4 \\ \hline \end{array}$	$\begin{array}{r} 9 \\ -5 \\ \hline \end{array}$	$\begin{array}{r} 9 \\ -6 \\ \hline \end{array}$
$\begin{array}{r} 9 \\ -7 \\ \hline \end{array}$	$\begin{array}{r} 9 \\ -8 \\ \hline \end{array}$	$\begin{array}{r} 9 \\ -9 \\ \hline \end{array}$	$\begin{array}{r} 10 \\ -9 \\ \hline \end{array}$

Solve the problems.

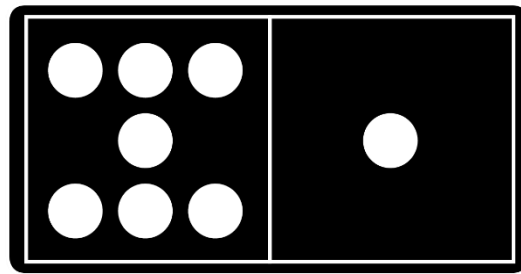
	$\begin{array}{r} 10 \\ -1 \\ \hline \end{array}$	$\begin{array}{r} 10 \\ -2 \\ \hline \end{array}$	$\begin{array}{r} 10 \\ -3 \\ \hline \end{array}$
$\begin{array}{r} 10 \\ -4 \\ \hline \end{array}$	$\begin{array}{r} 10 \\ -5 \\ \hline \end{array}$	$\begin{array}{r} 10 \\ -6 \\ \hline \end{array}$	$\begin{array}{r} 10 \\ -7 \\ \hline \end{array}$
$\begin{array}{r} 10 \\ -8 \\ \hline \end{array}$	$\begin{array}{r} 10 \\ -9 \\ \hline \end{array}$	$\begin{array}{r} 10 \\ -10 \\ \hline \end{array}$	



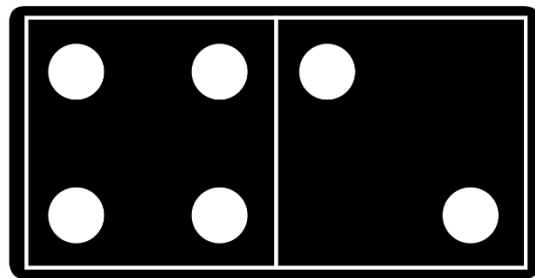
Subtract and write the answers on the table.

-	10	9	8	7	6	5	4	3	2	1
1										
2										
3										
4										
5										
6										
7										
8										
9										
10										


Subtraction Domino.



	-		=	
--	---	--	---	--



	-		=	
--	---	--	---	--






	-		=	
--	---	--	---	--

Subtract.


$6 - 5 = \underline{\quad}$		$6 - 3 = \underline{\quad}$
$7 - 2 = \underline{\quad}$		$7 - 2 = \underline{\quad}$
$5 - 4 = \underline{\quad}$		$3 - 2 = \underline{\quad}$
$3 - 1 = \underline{\quad}$		$7 - 4 = \underline{\quad}$
$6 - 4 = \underline{\quad}$		$7 - 5 = \underline{\quad}$
$4 - 3 = \underline{\quad}$		$5 - 3 = \underline{\quad}$
$5 - 5 = \underline{\quad}$		$7 - 6 = \underline{\quad}$

What will the clock look like?

11:30	6:30	1:30
		

Practice subtraction.


$\begin{array}{r} 7 \\ - 3 \\ \hline \end{array}$	$\begin{array}{r} 6 \\ - 2 \\ \hline \end{array}$	$\begin{array}{r} 3 \\ - 1 \\ \hline \end{array}$
$\begin{array}{r} 5 \\ - 0 \\ \hline \end{array}$	$\begin{array}{r} 5 \\ - 5 \\ \hline \end{array}$	$\begin{array}{r} 4 \\ - 3 \\ \hline \end{array}$
$\begin{array}{r} 2 \\ - 1 \\ \hline \end{array}$	$\begin{array}{r} 7 \\ - 6 \\ \hline \end{array}$	$\begin{array}{r} 6 \\ - 2 \\ \hline \end{array}$







Subtract.

$\begin{array}{r} 1 \\ - 1 \\ \hline \end{array}$	$\begin{array}{r} 2 \\ - 2 \\ \hline \end{array}$	$\begin{array}{r} 3 \\ - 1 \\ \hline \end{array}$
$\begin{array}{r} 3 \\ - 0 \\ \hline \end{array}$	$\begin{array}{r} 3 \\ - 3 \\ \hline \end{array}$	$\begin{array}{r} 1 \\ - 0 \\ \hline \end{array}$
$\begin{array}{r} 3 \\ - 2 \\ \hline \end{array}$	$\begin{array}{r} 4 \\ - 4 \\ \hline \end{array}$	$\begin{array}{r} 4 \\ - 0 \\ \hline \end{array}$
$\begin{array}{r} 2 \\ - 0 \\ \hline \end{array}$	$\begin{array}{r} 3 \\ - 2 \\ \hline \end{array}$	$\begin{array}{r} 4 \\ - 2 \\ \hline \end{array}$
$\begin{array}{r} 2 \\ - 1 \\ \hline \end{array}$	$\begin{array}{r} 4 \\ - 1 \\ \hline \end{array}$	$\begin{array}{r} 4 \\ - 3 \\ \hline \end{array}$

Complete the graph.




5				
4				
3				
2				
1				
				

How many starfish are there? _____





How many fewer fish are there than seaweed? _____

Subtract.


 <hr/>	$\begin{array}{r} 5 \\ -0 \\ \hline \end{array}$	$\begin{array}{r} 6 \\ -5 \\ \hline \end{array}$
$\begin{array}{r} 6 \\ -0 \\ \hline \end{array}$	$\begin{array}{r} 6 \\ -3 \\ \hline \end{array}$	$\begin{array}{r} 5 \\ -5 \\ \hline \end{array}$
$\begin{array}{r} 5 \\ -2 \\ \hline \end{array}$	$\begin{array}{r} 5 \\ -1 \\ \hline \end{array}$	$\begin{array}{r} 6 \\ -4 \\ \hline \end{array}$
$\begin{array}{r} 6 \\ -2 \\ \hline \end{array}$	$\begin{array}{r} 7 \\ -4 \\ \hline \end{array}$	$\begin{array}{r} 5 \\ -4 \\ \hline \end{array}$
$\begin{array}{r} 7 \\ -7 \\ \hline \end{array}$	$\begin{array}{r} 7 \\ -1 \\ \hline \end{array}$	$\begin{array}{r} 7 \\ -0 \\ \hline \end{array}$
$\begin{array}{r} 7 \\ -6 \\ \hline \end{array}$	$\begin{array}{r} 6 \\ -1 \\ \hline \end{array}$	$\begin{array}{r} 7 \\ -5 \\ \hline \end{array}$
$\begin{array}{r} 7 \\ -2 \\ \hline \end{array}$	$\begin{array}{r} 6 \\ -6 \\ \hline \end{array}$	$\begin{array}{r} 7 \\ -3 \\ \hline \end{array}$

Complete the graph.




5				
4				
3				
2				
1				
				

Multiply.



2 groups of 3 =

$$2 \times 3 =$$



4 groups of 3 =

$$4 \times 3 =$$




3 groups of 4 =

$$3 \times 4 =$$



5 groups of 6 =

$$5 \times 6 =$$



6 groups of 5 =

$$6 \times 5 =$$

Multiply.

$\begin{array}{r} 1 \\ \times 0 \\ \hline \end{array}$	$\begin{array}{r} 1 \\ \times 1 \\ \hline \end{array}$	$\begin{array}{r} 1 \\ \times 2 \\ \hline \end{array}$
$\begin{array}{r} 1 \\ \times 3 \\ \hline \end{array}$	$\begin{array}{r} 1 \\ \times 4 \\ \hline \end{array}$	$\begin{array}{r} 1 \\ \times 5 \\ \hline \end{array}$
$\begin{array}{r} 1 \\ \times 6 \\ \hline \end{array}$	$\begin{array}{r} 1 \\ \times 7 \\ \hline \end{array}$	$\begin{array}{r} 1 \\ \times 8 \\ \hline \end{array}$
$\begin{array}{r} 1 \\ \times 9 \\ \hline \end{array}$	$\begin{array}{r} 1 \\ \times 10 \\ \hline \end{array}$	



Multiply.

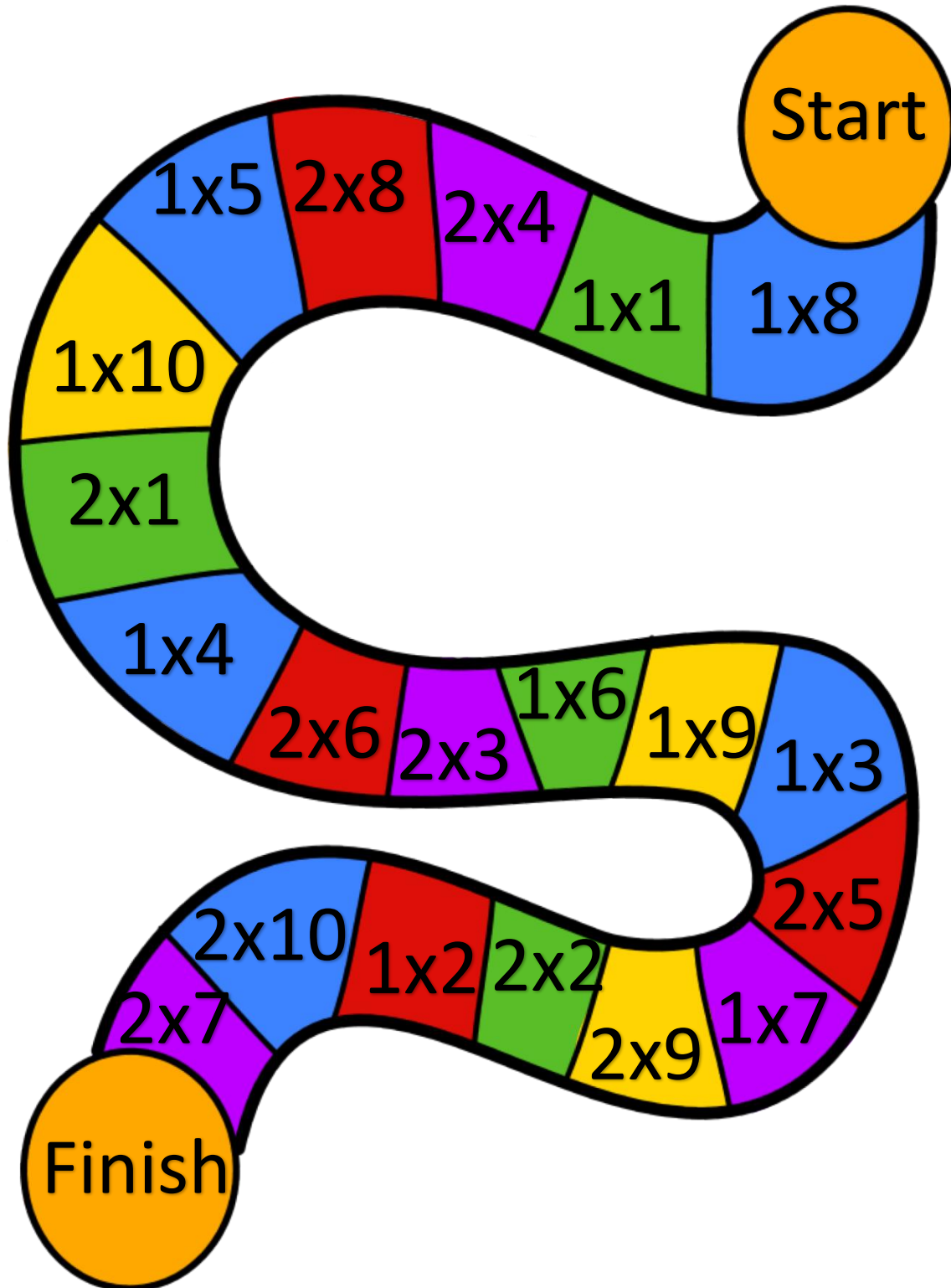
$4 \times 1 =$

$1 \times 5 =$

x		x		x		x		x		x
2	x	2	=				x	1	=	4
=		=		=		=		=		=
	x		=			4	x		=	

2 <u>x 0</u>	2 <u>x 1</u>	2 <u>x 2</u>
2 <u>x 3</u>	2 <u>x 4</u>	2 <u>x 5</u>
2 <u>x 6</u>	2 <u>x 7</u>	2 <u>x 8</u>
2 <u>x 9</u>	2 <u>x 10</u>	

Counters and dice are required to play.



Multiply.

$\begin{array}{r} 3 \\ \times 0 \\ \hline \end{array}$	$\begin{array}{r} 3 \\ \times 1 \\ \hline \end{array}$	$\begin{array}{r} 3 \\ \times 2 \\ \hline \end{array}$
$\begin{array}{r} 3 \\ \times 3 \\ \hline \end{array}$	$\begin{array}{r} 3 \\ \times 4 \\ \hline \end{array}$	$\begin{array}{r} 3 \\ \times 5 \\ \hline \end{array}$
$\begin{array}{r} 3 \\ \times 6 \\ \hline \end{array}$	$\begin{array}{r} 3 \\ \times 7 \\ \hline \end{array}$	$\begin{array}{r} 3 \\ \times 8 \\ \hline \end{array}$
$\begin{array}{r} 3 \\ \times 9 \\ \hline \end{array}$	$\begin{array}{r} 3 \\ \times 10 \\ \hline \end{array}$	



Multiply.

$\begin{array}{r} 4 \\ \times 0 \\ \hline \end{array}$	$\begin{array}{r} 4 \\ \times 1 \\ \hline \end{array}$	$\begin{array}{r} 4 \\ \times 2 \\ \hline \end{array}$
$\begin{array}{r} 4 \\ \times 3 \\ \hline \end{array}$	$\begin{array}{r} 4 \\ \times 4 \\ \hline \end{array}$	$\begin{array}{r} 4 \\ \times 5 \\ \hline \end{array}$
$\begin{array}{r} 4 \\ \times 6 \\ \hline \end{array}$	$\begin{array}{r} 4 \\ \times 7 \\ \hline \end{array}$	$\begin{array}{r} 4 \\ \times 8 \\ \hline \end{array}$
$\begin{array}{r} 4 \\ \times 9 \\ \hline \end{array}$	$\begin{array}{r} 4 \\ \times 10 \\ \hline \end{array}$	




Multiply.

$\begin{array}{r} 5 \\ \times 0 \\ \hline \end{array}$	$\begin{array}{r} 5 \\ \times 1 \\ \hline \end{array}$	$\begin{array}{r} 5 \\ \times 2 \\ \hline \end{array}$
$\begin{array}{r} 5 \\ \times 3 \\ \hline \end{array}$	$\begin{array}{r} 5 \\ \times 4 \\ \hline \end{array}$	$\begin{array}{r} 5 \\ \times 5 \\ \hline \end{array}$
$\begin{array}{r} 5 \\ \times 6 \\ \hline \end{array}$	$\begin{array}{r} 5 \\ \times 7 \\ \hline \end{array}$	$\begin{array}{r} 5 \\ \times 8 \\ \hline \end{array}$
$\begin{array}{r} 5 \\ \times 9 \\ \hline \end{array}$	$\begin{array}{r} 5 \\ \times 10 \\ \hline \end{array}$	



Counters and dice are required to play.




Multiply and write the answers on the table.

x	1	2	3	4	5	6	7	8	9	10
1										
2										
3										
4										
5										
6										
7										
8										
9										
10										

Add.

$\begin{array}{r} 23 \\ +56 \\ \hline \end{array}$	$\begin{array}{r} 78 \\ +21 \\ \hline \end{array}$	$\begin{array}{r} 42 \\ +95 \\ \hline \end{array}$
$\begin{array}{r} 90 \\ +29 \\ \hline \end{array}$	$\begin{array}{r} 63 \\ +35 \\ \hline \end{array}$	$\begin{array}{r} 84 \\ +15 \\ \hline \end{array}$
$\begin{array}{r} 65 \\ +42 \\ \hline \end{array}$	$\begin{array}{r} 82 \\ +16 \\ \hline \end{array}$	$\begin{array}{r} 74 \\ +62 \\ \hline \end{array}$
$\begin{array}{r} 83 \\ +56 \\ \hline \end{array}$	$\begin{array}{r} 28 \\ +82 \\ \hline \end{array}$	$\begin{array}{r} 84 \\ +44 \\ \hline \end{array}$
$\begin{array}{r} 75 \\ +84 \\ \hline \end{array}$	$\begin{array}{r} 62 \\ +77 \\ \hline \end{array}$	$\begin{array}{r} 83 \\ +36 \\ \hline \end{array}$





Add.

$\begin{array}{r} 73 \\ +52 \\ \hline \end{array}$	$\begin{array}{r} 48 \\ +81 \\ \hline \end{array}$	$\begin{array}{r} 26 \\ +63 \\ \hline \end{array}$
$\begin{array}{r} 85 \\ +24 \\ \hline \end{array}$	$\begin{array}{r} 62 \\ +95 \\ \hline \end{array}$	$\begin{array}{r} 72 \\ +15 \\ \hline \end{array}$
$\begin{array}{r} 36 \\ +71 \\ \hline \end{array}$	$\begin{array}{r} 82 \\ +57 \\ \hline \end{array}$	$\begin{array}{r} 83 \\ +25 \\ \hline \end{array}$
$\begin{array}{r} 64 \\ +33 \\ \hline \end{array}$	$\begin{array}{r} 72 \\ +57 \\ \hline \end{array}$	$\begin{array}{r} 95 \\ +44 \\ \hline \end{array}$
$\begin{array}{r} 22 \\ +85 \\ \hline \end{array}$	$\begin{array}{r} 74 \\ +35 \\ \hline \end{array}$	$\begin{array}{r} 62 \\ +77 \\ \hline \end{array}$



What will the clock look like?




Add.

$\begin{array}{r} 93 \\ +95 \\ \hline \end{array}$	$\begin{array}{r} 84 \\ +73 \\ \hline \end{array}$	$\begin{array}{r} 74 \\ +65 \\ \hline \end{array}$
$\begin{array}{r} 42 \\ +93 \\ \hline \end{array}$	$\begin{array}{r} 83 \\ +85 \\ \hline \end{array}$	$\begin{array}{r} 68 \\ +71 \\ \hline \end{array}$
$\begin{array}{r} 56 \\ +82 \\ \hline \end{array}$	$\begin{array}{r} 47 \\ +42 \\ \hline \end{array}$	$\begin{array}{r} 61 \\ +89 \\ \hline \end{array}$
$\begin{array}{r} 17 \\ +91 \\ \hline \end{array}$	$\begin{array}{r} 53 \\ +44 \\ \hline \end{array}$	$\begin{array}{r} 79 \\ +30 \\ \hline \end{array}$
$\begin{array}{r} 38 \\ +80 \\ \hline \end{array}$	$\begin{array}{r} 27 \\ +81 \\ \hline \end{array}$	$\begin{array}{r} 33 \\ +55 \\ \hline \end{array}$



Add.

$\begin{array}{r} 63 \\ +63 \\ \hline \end{array}$	$\begin{array}{r} 84 \\ +84 \\ \hline \end{array}$	$\begin{array}{r} 51 \\ +51 \\ \hline \end{array}$
$\begin{array}{r} 92 \\ +92 \\ \hline \end{array}$	$\begin{array}{r} 73 \\ +73 \\ \hline \end{array}$	$\begin{array}{r} 52 \\ +52 \\ \hline \end{array}$
$\begin{array}{r} 64 \\ +64 \\ \hline \end{array}$	$\begin{array}{r} 81 \\ +81 \\ \hline \end{array}$	$\begin{array}{r} 92 \\ +92 \\ \hline \end{array}$
$\begin{array}{r} 91 \\ +91 \\ \hline \end{array}$	$\begin{array}{r} 82 \\ +82 \\ \hline \end{array}$	$\begin{array}{r} 74 \\ +74 \\ \hline \end{array}$
$\begin{array}{r} 62 \\ +62 \\ \hline \end{array}$	$\begin{array}{r} 54 \\ +54 \\ \hline \end{array}$	$\begin{array}{r} 44 \\ +44 \\ \hline \end{array}$



Add.

$9 + 5 = \underline{\quad}$

$10 + 1 = \underline{\quad}$

$10 + 6 = \underline{\quad}$

$9 + 2 = \underline{\quad}$

$9 + 9 = \underline{\quad}$


$10 + 3 = \underline{\quad}$

$9 + 6 = \underline{\quad}$

$10 + 5 = \underline{\quad}$

$9 + 7 = \underline{\quad}$

$10 + 9 = \underline{\quad}$



$9 + 4 = \underline{\quad}$

$9 + 8 = \underline{\quad}$

$10 + 8 = \underline{\quad}$

$10 + 4 = \underline{\quad}$

$9 + 1 = \underline{\quad}$

$9 + 3 = \underline{\quad}$

$10 + 2 = \underline{\quad}$

$10 + 7 = \underline{\quad}$

$9 + 0 = \underline{\quad}$

$10 + 10 = \underline{\quad}$

Color the fractions.



1






$\frac{1}{4}$



$\frac{1}{2}$

Color the fractions.

 <p>$\frac{2}{2}$</p>	 <p>$\frac{3}{4}$</p>	 <p>$\frac{4}{4}$</p>
---	---	---

Add.

$\begin{array}{r} 11 \\ +11 \\ \hline \end{array}$	$\begin{array}{r} 11 \\ +10 \\ \hline \end{array}$	$\begin{array}{r} 11 \\ +9 \\ \hline \end{array}$
$\begin{array}{r} 11 \\ +8 \\ \hline \end{array}$	$\begin{array}{r} 11 \\ +7 \\ \hline \end{array}$	$\begin{array}{r} 11 \\ +6 \\ \hline \end{array}$
$\begin{array}{r} 11 \\ +5 \\ \hline \end{array}$	$\begin{array}{r} 11 \\ +4 \\ \hline \end{array}$	$\begin{array}{r} 11 \\ +3 \\ \hline \end{array}$
$\begin{array}{r} 11 \\ +2 \\ \hline \end{array}$		$\begin{array}{r} 11 \\ +1 \\ \hline \end{array}$

Subtract.

$9 - 9 = \underline{\quad}$

$9 - 8 = \underline{\quad}$

$9 - 7 = \underline{\quad}$

$9 - 6 = \underline{\quad}$

$9 - 5 = \underline{\quad}$

$9 - 4 = \underline{\quad}$

$9 - 3 = \underline{\quad}$

$9 - 2 = \underline{\quad}$

$9 - 1 = \underline{\quad}$



$8 - 8 = \underline{\quad}$

$8 - 7 = \underline{\quad}$

$8 - 6 = \underline{\quad}$

$8 - 5 = \underline{\quad}$

$8 - 4 = \underline{\quad}$

$8 - 3 = \underline{\quad}$

$8 - 2 = \underline{\quad}$

$8 - 1 = \underline{\quad}$

Color the fractions.



$\frac{2}{2}$





$\frac{2}{4}$



$\frac{1}{2}$

Subtract.


	$\begin{array}{r} 10 \\ -10 \\ \hline \end{array}$	$\begin{array}{r} 10 \\ -9 \\ \hline \end{array}$
$\begin{array}{r} 10 \\ -8 \\ \hline \end{array}$	$\begin{array}{r} 10 \\ -7 \\ \hline \end{array}$	$\begin{array}{r} 10 \\ -6 \\ \hline \end{array}$
$\begin{array}{r} 10 \\ -5 \\ \hline \end{array}$	$\begin{array}{r} 10 \\ -4 \\ \hline \end{array}$	$\begin{array}{r} 10 \\ -3 \\ \hline \end{array}$
$\begin{array}{r} 10 \\ -2 \\ \hline \end{array}$	$\begin{array}{r} 10 \\ -1 \\ \hline \end{array}$	

Solve the problems.


$\begin{array}{r} 137 \\ +652 \\ \hline \end{array}$	$\begin{array}{r} 729 \\ +230 \\ \hline \end{array}$	$\begin{array}{r} 775 \\ +114 \\ \hline \end{array}$
$\begin{array}{r} 828 \\ +716 \\ \hline \end{array}$	$\begin{array}{r} 593 \\ +341 \\ \hline \end{array}$	$\begin{array}{r} 484 \\ +123 \\ \hline \end{array}$
$\begin{array}{r} 674 \\ +212 \\ \hline \end{array}$	$\begin{array}{r} 168 \\ +830 \\ \hline \end{array}$	$\begin{array}{r} 469 \\ +530 \\ \hline \end{array}$
$\begin{array}{r} 839 \\ +712 \\ \hline \end{array}$	$\begin{array}{r} 766 \\ +524 \\ \hline \end{array}$	$\begin{array}{r} 588 \\ +487 \\ \hline \end{array}$
$\begin{array}{r} 456 \\ +243 \\ \hline \end{array}$	$\begin{array}{r} 827 \\ +171 \\ \hline \end{array}$	$\begin{array}{r} 678 \\ +321 \\ \hline \end{array}$

Solve the problems.

$\begin{array}{r} 17 \\ -12 \\ \hline \end{array}$	$\begin{array}{r} 45 \\ -34 \\ \hline \end{array}$	$\begin{array}{r} 49 \\ -10 \\ \hline \end{array}$
$\begin{array}{r} 56 \\ -32 \\ \hline \end{array}$	$\begin{array}{r} 72 \\ -11 \\ \hline \end{array}$	$\begin{array}{r} 89 \\ -10 \\ \hline \end{array}$
$\begin{array}{r} 34 \\ -14 \\ \hline \end{array}$	$\begin{array}{r} 16 \\ -13 \\ \hline \end{array}$	$\begin{array}{r} 78 \\ -20 \\ \hline \end{array}$
$\begin{array}{r} 53 \\ -41 \\ \hline \end{array}$	$\begin{array}{r} 67 \\ -22 \\ \hline \end{array}$	$\begin{array}{r} 83 \\ -23 \\ \hline \end{array}$
$\begin{array}{r} 74 \\ -11 \\ \hline \end{array}$	$\begin{array}{r} 63 \\ -20 \\ \hline \end{array}$	$\begin{array}{r} 37 \\ -11 \\ \hline \end{array}$



What will the clock look like?




Write the correct number of thousands, hundreds, tens, and ones.

	Thousands	Hundreds	Tens	Ones
4,269				
7,104				
3,052				
1,186				

Solve the problems.

$\begin{array}{r} 89 \\ -23 \\ \hline \end{array}$	$\begin{array}{r} 45 \\ -31 \\ \hline \end{array}$	$\begin{array}{r} 74 \\ -40 \\ \hline \end{array}$
$\begin{array}{r} 90 \\ -60 \\ \hline \end{array}$	$\begin{array}{r} 82 \\ -50 \\ \hline \end{array}$	$\begin{array}{r} 81 \\ -61 \\ \hline \end{array}$
$\begin{array}{r} 63 \\ -52 \\ \hline \end{array}$	$\begin{array}{r} 77 \\ -46 \\ \hline \end{array}$	$\begin{array}{r} 29 \\ -25 \\ \hline \end{array}$
$\begin{array}{r} 36 \\ -23 \\ \hline \end{array}$	$\begin{array}{r} 67 \\ -44 \\ \hline \end{array}$	$\begin{array}{r} 87 \\ -43 \\ \hline \end{array}$
$\begin{array}{r} 17 \\ -11 \\ \hline \end{array}$	$\begin{array}{r} 19 \\ -15 \\ \hline \end{array}$	$\begin{array}{r} 25 \\ -14 \\ \hline \end{array}$

What will the clock look like?




Write the correct number of thousands, hundreds, tens, and ones.

	Thousands	Hundreds	Tens	Ones
7,829				
3,486				
1,862				
8,385				

Solve the problems.

$\begin{array}{r} 17 \\ -15 \\ \hline \end{array}$	$\begin{array}{r} 22 \\ -11 \\ \hline \end{array}$	$\begin{array}{r} 69 \\ -28 \\ \hline \end{array}$
$\begin{array}{r} 82 \\ -51 \\ \hline \end{array}$	$\begin{array}{r} 74 \\ -33 \\ \hline \end{array}$	$\begin{array}{r} 88 \\ -70 \\ \hline \end{array}$
$\begin{array}{r} 38 \\ -17 \\ \hline \end{array}$	$\begin{array}{r} 96 \\ -15 \\ \hline \end{array}$	$\begin{array}{r} 71 \\ -60 \\ \hline \end{array}$
$\begin{array}{r} 53 \\ -42 \\ \hline \end{array}$	$\begin{array}{r} 17 \\ -12 \\ \hline \end{array}$	$\begin{array}{r} 89 \\ -53 \\ \hline \end{array}$
$\begin{array}{r} 19 \\ -14 \\ \hline \end{array}$	$\begin{array}{r} 76 \\ -25 \\ \hline \end{array}$	$\begin{array}{r} 35 \\ -12 \\ \hline \end{array}$

What will the clock look like?



Write the correct number of thousands, hundreds, tens, and ones.

	Thousands	Hundreds	Tens	Ones
5,837				
3,967				
9,915				
8,286				

Solve the problems.

$$\begin{array}{r} 853 \\ +984 \\ \hline \end{array}$$

$$\begin{array}{r} 429 \\ +592 \\ \hline \end{array}$$

$$\begin{array}{r} 928 \\ +306 \\ \hline \end{array}$$

$$\begin{array}{r} 635 \\ +650 \\ \hline \end{array}$$

$$\begin{array}{r} 826 \\ +485 \\ \hline \end{array}$$

$$\begin{array}{r} 462 \\ +828 \\ \hline \end{array}$$

$$\begin{array}{r} 427 \\ +183 \\ \hline \end{array}$$

$$\begin{array}{r} 264 \\ +158 \\ \hline \end{array}$$

$$\begin{array}{r} 475 \\ +842 \\ \hline \end{array}$$

$$\begin{array}{r} 194 \\ +149 \\ \hline \end{array}$$

$$\begin{array}{r} 104 \\ +375 \\ \hline \end{array}$$

$$\begin{array}{r} 504 \\ +299 \\ \hline \end{array}$$


$$\begin{array}{r} 927 \\ +294 \\ \hline \end{array}$$

$$\begin{array}{r} 446 \\ +294 \\ \hline \end{array}$$


$$\begin{array}{r} 592 \\ +937 \\ \hline \end{array}$$


Use a ruler to measure these objects, then write your answers.

	Inches
Book	
Pencil	
Spoon	
Toy	



Multiply.

	
4 groups of 2 =	$4 \times 2 =$

	
6 groups of 1 =	$6 \times 1 =$

Solve the problems.

$$\begin{array}{r} 475 \\ +927 \\ \hline \end{array}$$

$$\begin{array}{r} 842 \\ +682 \\ \hline \end{array}$$

$$\begin{array}{r} 582 \\ +927 \\ \hline \end{array}$$

$$\begin{array}{r} 582 \\ +294 \\ \hline \end{array}$$

$$\begin{array}{r} 485 \\ +859 \\ \hline \end{array}$$

$$\begin{array}{r} 864 \\ +628 \\ \hline \end{array}$$

$$\begin{array}{r} 304 \\ +287 \\ \hline \end{array}$$

$$\begin{array}{r} 492 \\ +395 \\ \hline \end{array}$$

$$\begin{array}{r} 748 \\ +927 \\ \hline \end{array}$$

$$\begin{array}{r} 429 \\ +921 \\ \hline \end{array}$$

$$\begin{array}{r} 490 \\ +193 \\ \hline \end{array}$$

$$\begin{array}{r} 204 \\ +958 \\ \hline \end{array}$$


$$\begin{array}{r} 948 \\ +493 \\ \hline \end{array}$$

$$\begin{array}{r} 840 \\ +893 \\ \hline \end{array}$$

$$\begin{array}{r} 940 \\ +580 \\ \hline \end{array}$$

Use a ruler to measure these objects, then write your answers.

	Inches
Notebook	
Pen	
Box	
frame	



Draw 2 groups of 6 apples and multiply.

2 groups of 6 =

$2 \times 6 =$

Solve the problems.

$$\begin{array}{r} 729 \\ +937 \\ \hline \end{array}$$

$$\begin{array}{r} 926 \\ +204 \\ \hline \end{array}$$

$$\begin{array}{r} 284 \\ +837 \\ \hline \end{array}$$

$$\begin{array}{r} 284 \\ +283 \\ \hline \end{array}$$

$$\begin{array}{r} 283 \\ +934 \\ \hline \end{array}$$

$$\begin{array}{r} 274 \\ +173 \\ \hline \end{array}$$

$$\begin{array}{r} 579 \\ +759 \\ \hline \end{array}$$

$$\begin{array}{r} 194 \\ +849 \\ \hline \end{array}$$

$$\begin{array}{r} 240 \\ +826 \\ \hline \end{array}$$

$$\begin{array}{r} 284 \\ +947 \\ \hline \end{array}$$

$$\begin{array}{r} 927 \\ +846 \\ \hline \end{array}$$

$$\begin{array}{r} 385 \\ +938 \\ \hline \end{array}$$


$$\begin{array}{r} 927 \\ +264 \\ \hline \end{array}$$

$$\begin{array}{r} 734 \\ +284 \\ \hline \end{array}$$

$$\begin{array}{r} 465 \\ +284 \\ \hline \end{array}$$

Add.

$\begin{array}{r} 12 \\ + 2 \\ \hline \end{array}$	$\begin{array}{r} 12 \\ + 12 \\ \hline \end{array}$	$\begin{array}{r} 12 \\ + 8 \\ \hline \end{array}$
$\begin{array}{r} 12 \\ + 5 \\ \hline \end{array}$	$\begin{array}{r} 12 \\ + 3 \\ \hline \end{array}$	$\begin{array}{r} 12 \\ + 10 \\ \hline \end{array}$
$\begin{array}{r} 12 \\ + 9 \\ \hline \end{array}$	$\begin{array}{r} 12 \\ + 4 \\ \hline \end{array}$	$\begin{array}{r} 12 \\ + 6 \\ \hline \end{array}$
$\begin{array}{r} 12 \\ + 7 \\ \hline \end{array}$	$\begin{array}{r} 12 \\ + 11 \\ \hline \end{array}$	$\begin{array}{r} 12 \\ + 1 \\ \hline \end{array}$



Subtract.

	$\begin{array}{r} 11 \\ - 11 \\ \hline \end{array}$	$\begin{array}{r} 11 \\ - 1 \\ \hline \end{array}$
$\begin{array}{r} 11 \\ - 5 \\ \hline \end{array}$	$\begin{array}{r} 11 \\ - 3 \\ \hline \end{array}$	$\begin{array}{r} 11 \\ - 9 \\ \hline \end{array}$
$\begin{array}{r} 11 \\ - 8 \\ \hline \end{array}$	$\begin{array}{r} 11 \\ - 4 \\ \hline \end{array}$	$\begin{array}{r} 11 \\ - 6 \\ \hline \end{array}$
$\begin{array}{r} 11 \\ - 7 \\ \hline \end{array}$	$\begin{array}{r} 11 \\ - 10 \\ \hline \end{array}$	$\begin{array}{r} 11 \\ - 2 \\ \hline \end{array}$

Draw 1 group of 3 balloons and multiply.

<p>1 group of 3 =</p>	<p>1 x 3 =</p>
-----------------------	----------------

Add.

	$\begin{array}{r} 13 \\ +12 \\ \hline \end{array}$	$\begin{array}{r} 13 \\ + 8 \\ \hline \end{array}$
$\begin{array}{r} 13 \\ + 5 \\ \hline \end{array}$	$\begin{array}{r} 13 \\ + 3 \\ \hline \end{array}$	$\begin{array}{r} 13 \\ +10 \\ \hline \end{array}$
$\begin{array}{r} 13 \\ + 9 \\ \hline \end{array}$	$\begin{array}{r} 13 \\ + 4 \\ \hline \end{array}$	$\begin{array}{r} 13 \\ + 6 \\ \hline \end{array}$
$\begin{array}{r} 13 \\ + 7 \\ \hline \end{array}$	$\begin{array}{r} 13 \\ +11 \\ \hline \end{array}$	$\begin{array}{r} 13 \\ + 1 \\ \hline \end{array}$
$\begin{array}{r} 13 \\ +13 \\ \hline \end{array}$	$\begin{array}{r} 13 \\ + 2 \\ \hline \end{array}$	

Subtract.


$\begin{array}{r} 12 \\ - 2 \\ \hline \end{array}$	$\begin{array}{r} 12 \\ - 12 \\ \hline \end{array}$	$\begin{array}{r} 12 \\ - 8 \\ \hline \end{array}$
$\begin{array}{r} 12 \\ - 5 \\ \hline \end{array}$	$\begin{array}{r} 12 \\ - 3 \\ \hline \end{array}$	$\begin{array}{r} 12 \\ - 10 \\ \hline \end{array}$
$\begin{array}{r} 12 \\ - 9 \\ \hline \end{array}$	$\begin{array}{r} 12 \\ - 4 \\ \hline \end{array}$	$\begin{array}{r} 12 \\ - 6 \\ \hline \end{array}$
$\begin{array}{r} 12 \\ - 7 \\ \hline \end{array}$	$\begin{array}{r} 12 \\ - 11 \\ \hline \end{array}$	$\begin{array}{r} 12 \\ - 1 \\ \hline \end{array}$



Subtract.

	$\begin{array}{r} 13 \\ -12 \\ \hline \end{array}$	$\begin{array}{r} 13 \\ - 8 \\ \hline \end{array}$
$\begin{array}{r} 13 \\ - 5 \\ \hline \end{array}$	$\begin{array}{r} 13 \\ - 3 \\ \hline \end{array}$	$\begin{array}{r} 13 \\ -10 \\ \hline \end{array}$
$\begin{array}{r} 13 \\ - 9 \\ \hline \end{array}$	$\begin{array}{r} 13 \\ - 4 \\ \hline \end{array}$	$\begin{array}{r} 13 \\ - 6 \\ \hline \end{array}$
$\begin{array}{r} 13 \\ - 7 \\ \hline \end{array}$	$\begin{array}{r} 13 \\ -11 \\ \hline \end{array}$	$\begin{array}{r} 13 \\ - 1 \\ \hline \end{array}$
$\begin{array}{r} 13 \\ -13 \\ \hline \end{array}$	$\begin{array}{r} 13 \\ - 2 \\ \hline \end{array}$	

What will the clock look like?






Multiply.

4	x	1	=			1	x	5	=	
x		x		x		x		x		x
2	x	2	=				x	1	=	4
=		=		=		=		=		=
	x		=			4	x		=	


Solve the problems.

$\begin{array}{r} 137 \\ - 22 \\ \hline \end{array}$	$\begin{array}{r} 729 \\ - 203 \\ \hline \end{array}$	$\begin{array}{r} 775 \\ - 114 \\ \hline \end{array}$
$\begin{array}{r} 828 \\ - 716 \\ \hline \end{array}$	$\begin{array}{r} 593 \\ - 341 \\ \hline \end{array}$	$\begin{array}{r} 484 \\ - 123 \\ \hline \end{array}$
$\begin{array}{r} 674 \\ - 212 \\ \hline \end{array}$	$\begin{array}{r} 868 \\ - 130 \\ \hline \end{array}$	$\begin{array}{r} 469 \\ - 430 \\ \hline \end{array}$
$\begin{array}{r} 839 \\ - 712 \\ \hline \end{array}$	$\begin{array}{r} 766 \\ - 524 \\ \hline \end{array}$	$\begin{array}{r} 588 \\ - 487 \\ \hline \end{array}$
$\begin{array}{r} 456 \\ - 243 \\ \hline \end{array}$	$\begin{array}{r} 827 \\ - 117 \\ \hline \end{array}$	$\begin{array}{r} 678 \\ - 321 \\ \hline \end{array}$

What will the clock look like?

5:40	6:10	1:20
		

Multiply.

$\begin{array}{r} 1 \\ \times 0 \\ \hline \end{array}$	$\begin{array}{r} 1 \\ \times 1 \\ \hline \end{array}$	$\begin{array}{r} 1 \\ \times 2 \\ \hline \end{array}$
$\begin{array}{r} 1 \\ \times 3 \\ \hline \end{array}$	$\begin{array}{r} 1 \\ \times 4 \\ \hline \end{array}$	$\begin{array}{r} 1 \\ \times 5 \\ \hline \end{array}$
$\begin{array}{r} 1 \\ \times 6 \\ \hline \end{array}$	$\begin{array}{r} 1 \\ \times 7 \\ \hline \end{array}$	$\begin{array}{r} 1 \\ \times 8 \\ \hline \end{array}$
$\begin{array}{r} 1 \\ \times 9 \\ \hline \end{array}$	$\begin{array}{r} 1 \\ \times 10 \\ \hline \end{array}$	

Solve the problems.

$$\begin{array}{r} 836 \\ -135 \\ \hline \end{array}$$

$$\begin{array}{r} 628 \\ -206 \\ \hline \end{array}$$

$$\begin{array}{r} 381 \\ -150 \\ \hline \end{array}$$

$$\begin{array}{r} 392 \\ -170 \\ \hline \end{array}$$

$$\begin{array}{r} 825 \\ -315 \\ \hline \end{array}$$

$$\begin{array}{r} 936 \\ -804 \\ \hline \end{array}$$

$$\begin{array}{r} 692 \\ -370 \\ \hline \end{array}$$

$$\begin{array}{r} 293 \\ -163 \\ \hline \end{array}$$

$$\begin{array}{r} 815 \\ -414 \\ \hline \end{array}$$

$$\begin{array}{r} 491 \\ -180 \\ \hline \end{array}$$

$$\begin{array}{r} 936 \\ -515 \\ \hline \end{array}$$




$$\begin{array}{r} 772 \\ -641 \\ \hline \end{array}$$

$$\begin{array}{r} 597 \\ -302 \\ \hline \end{array}$$


$$\begin{array}{r} 482 \\ -362 \\ \hline \end{array}$$

$$\begin{array}{r} 352 \\ -231 \\ \hline \end{array}$$

What will the clock look like?

11:35	8:30	2:55
		

Multiply.

$\begin{array}{r} 2 \\ \times 0 \\ \hline \end{array}$	$\begin{array}{r} 2 \\ \times 1 \\ \hline \end{array}$	$\begin{array}{r} 2 \\ \times 2 \\ \hline \end{array}$
$\begin{array}{r} 2 \\ \times 3 \\ \hline \end{array}$	$\begin{array}{r} 2 \\ \times 4 \\ \hline \end{array}$	$\begin{array}{r} 2 \\ \times 5 \\ \hline \end{array}$
$\begin{array}{r} 2 \\ \times 6 \\ \hline \end{array}$	$\begin{array}{r} 2 \\ \times 7 \\ \hline \end{array}$	$\begin{array}{r} 2 \\ \times 8 \\ \hline \end{array}$
$\begin{array}{r} 2 \\ \times 9 \\ \hline \end{array}$	$\begin{array}{r} 2 \\ \times 10 \\ \hline \end{array}$	

Solve the problems.

$\begin{array}{r} 5,729 \\ +3,937 \\ \hline \end{array}$	$\begin{array}{r} 6,926 \\ +2,204 \\ \hline \end{array}$	$\begin{array}{r} 6,284 \\ +9,837 \\ \hline \end{array}$
$\begin{array}{r} 6,284 \\ +4,283 \\ \hline \end{array}$	$\begin{array}{r} 9,283 \\ +7,934 \\ \hline \end{array}$	$\begin{array}{r} 3,274 \\ +9,173 \\ \hline \end{array}$
$\begin{array}{r} 7,579 \\ +5,759 \\ \hline \end{array}$	$\begin{array}{r} 3,194 \\ +6,849 \\ \hline \end{array}$	$\begin{array}{r} 8,240 \\ +1,826 \\ \hline \end{array}$
$\begin{array}{r} 2,484 \\ +9,747 \\ \hline \end{array}$	$\begin{array}{r} 9,257 \\ +8,469 \\ \hline \end{array}$	$\begin{array}{r} 3,835 \\ +9,378 \\ \hline \end{array}$
$\begin{array}{r} 9,272 \\ +2,640 \\ \hline \end{array}$	$\begin{array}{r} 7,344 \\ +2,874 \\ \hline \end{array}$	$\begin{array}{r} 4,653 \\ +2,824 \\ \hline \end{array}$

Multiply.

$\begin{array}{r} 3 \\ \times 0 \\ \hline \end{array}$	$\begin{array}{r} 3 \\ \times 1 \\ \hline \end{array}$	$\begin{array}{r} 3 \\ \times 2 \\ \hline \end{array}$
$\begin{array}{r} 3 \\ \times 3 \\ \hline \end{array}$	$\begin{array}{r} 3 \\ \times 4 \\ \hline \end{array}$	$\begin{array}{r} 3 \\ \times 5 \\ \hline \end{array}$
$\begin{array}{r} 3 \\ \times 6 \\ \hline \end{array}$	$\begin{array}{r} 3 \\ \times 7 \\ \hline \end{array}$	$\begin{array}{r} 3 \\ \times 8 \\ \hline \end{array}$
$\begin{array}{r} 3 \\ \times 9 \\ \hline \end{array}$	$\begin{array}{r} 3 \\ \times 10 \\ \hline \end{array}$	



Solve the problems.

$\begin{array}{r} 7,754 \\ +8,633 \\ \hline \end{array}$	$\begin{array}{r} 9,824 \\ +2,260 \\ \hline \end{array}$	$\begin{array}{r} 3,688 \\ +1,973 \\ \hline \end{array}$
$\begin{array}{r} 7,951 \\ +2,889 \\ \hline \end{array}$	$\begin{array}{r} 1,296 \\ +8,294 \\ \hline \end{array}$	$\begin{array}{r} 5,857 \\ +2,683 \\ \hline \end{array}$
$\begin{array}{r} 8,356 \\ +9,592 \\ \hline \end{array}$	$\begin{array}{r} 6,240 \\ +6,206 \\ \hline \end{array}$	$\begin{array}{r} 8,562 \\ +9,036 \\ \hline \end{array}$
$\begin{array}{r} 9,374 \\ +2,502 \\ \hline \end{array}$	$\begin{array}{r} 2,958 \\ +8,496 \\ \hline \end{array}$	$\begin{array}{r} 2,973 \\ +9,067 \\ \hline \end{array}$
$\begin{array}{r} 6,204 \\ +8,097 \\ \hline \end{array}$	$\begin{array}{r} 5,830 \\ +2,877 \\ \hline \end{array}$	$\begin{array}{r} 8,483 \\ +2,867 \\ \hline \end{array}$

Multiply.

2	x	3	=			1	x	3	=	
x		x		x		x		x		x
3	x	1	=				x	2	=	2
=		=		=		=		=		=
	x		=			1	x		=	

Solve the problems.


$\begin{array}{r} 672 \\ -283 \\ \hline \end{array}$	$\begin{array}{r} 724 \\ -145 \\ \hline \end{array}$	$\begin{array}{r} 985 \\ -196 \\ \hline \end{array}$
$\begin{array}{r} 849 \\ -788 \\ \hline \end{array}$	$\begin{array}{r} 945 \\ -599 \\ \hline \end{array}$	$\begin{array}{r} 831 \\ -668 \\ \hline \end{array}$

Multiply.


$\begin{array}{r} 2 \\ \times 0 \\ \hline \end{array}$	$\begin{array}{r} 2 \\ \times 8 \\ \hline \end{array}$	$\begin{array}{r} 2 \\ \times 3 \\ \hline \end{array}$
$\begin{array}{r} 1 \\ \times 3 \\ \hline \end{array}$	$\begin{array}{r} 1 \\ \times 4 \\ \hline \end{array}$	$\begin{array}{r} 2 \\ \times 9 \\ \hline \end{array}$
$\begin{array}{r} 1 \\ \times 5 \\ \hline \end{array}$	$\begin{array}{r} 1 \\ \times 8 \\ \hline \end{array}$	$\begin{array}{r} 2 \\ \times 5 \\ \hline \end{array}$
$\begin{array}{r} 1 \\ \times 1 \\ \hline \end{array}$	$\begin{array}{r} 2 \\ \times 10 \\ \hline \end{array}$	$\begin{array}{r} 1 \\ \times 0 \\ \hline \end{array}$
$\begin{array}{r} 2 \\ \times 0 \\ \hline \end{array}$	$\begin{array}{r} 2 \\ \times 7 \\ \hline \end{array}$	$\begin{array}{r} 1 \\ \times 7 \\ \hline \end{array}$
$\begin{array}{r} 2 \\ \times 6 \\ \hline \end{array}$	$\begin{array}{r} 2 \\ \times 1 \\ \hline \end{array}$	$\begin{array}{r} 1 \\ \times 9 \\ \hline \end{array}$
$\begin{array}{r} 2 \\ \times 4 \\ \hline \end{array}$	$\begin{array}{r} 1 \\ \times 6 \\ \hline \end{array}$	$\begin{array}{r} 1 \\ \times 10 \\ \hline \end{array}$

Solve.


Example: You have 4 treats, divide them between your two pets.




$$4 \div 2 =$$



$$10 \div 2 =$$




$$6 \div 2 =$$




$$8 \div 2 =$$

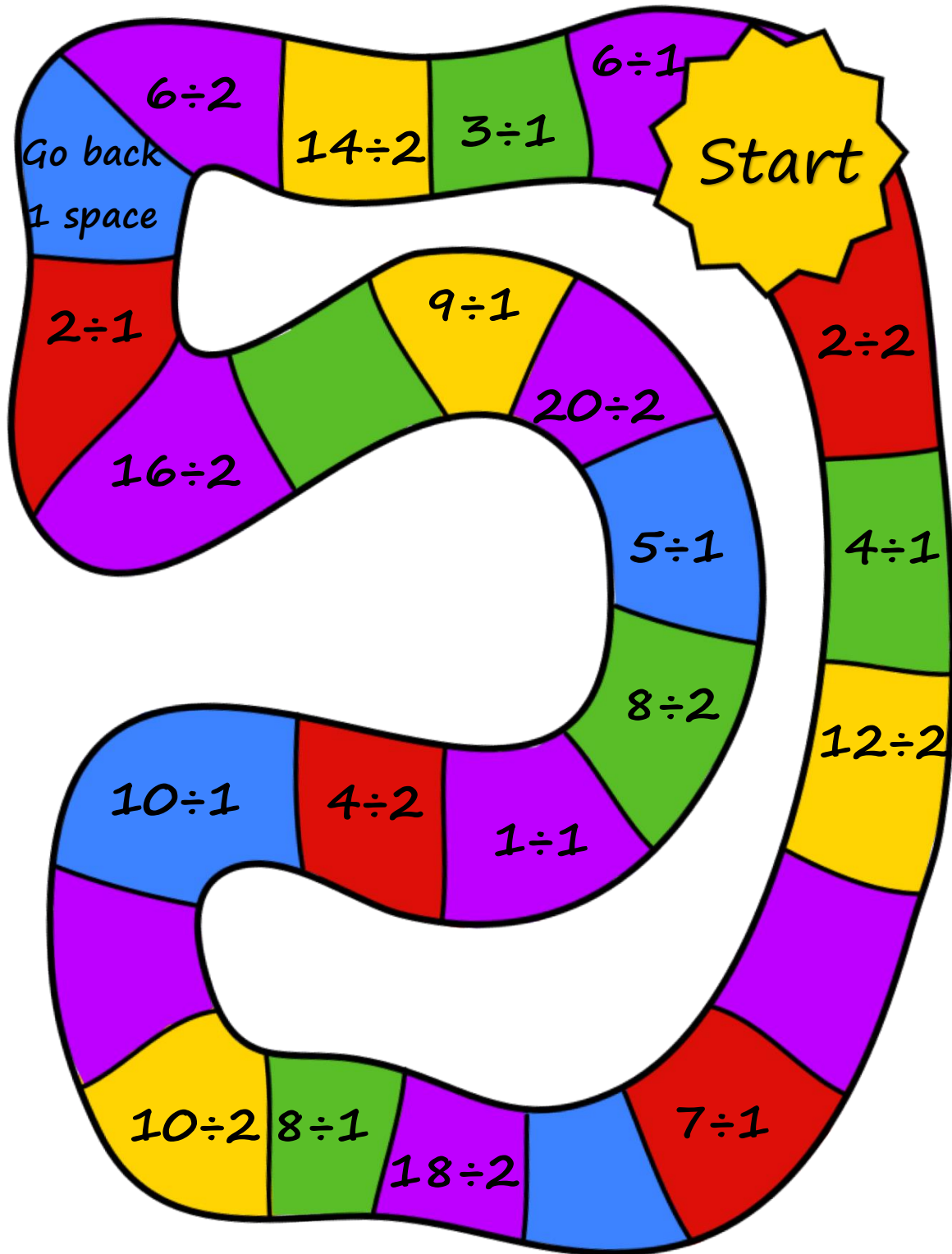
Solve the problems.

	$9 \div 1 =$	$5 \div 1 =$
$7 \div 1 =$	$1 \div 1 =$	$3 \div 1 =$
$10 \div 1 =$	$4 \div 1 =$	$8 \div 1 =$
$6 \div 1 =$	$2 \div 1 =$	






	$20 \div 2 =$	$18 \div 2 =$
$16 \div 2 =$	$14 \div 2 =$	$12 \div 2 =$
$10 \div 2 =$	$8 \div 2 =$	$6 \div 2 =$
$4 \div 2 =$	$2 \div 2 =$	

Counters and dice are required to play.






Solve.





Draw fish.



$$6 \div 3 =$$



$$15 \div 3 =$$



$$20 \div 4 =$$

Solve the problems.




	$30 \div 3 =$	$27 \div 3 =$
$24 \div 3 =$	$21 \div 3 =$	$18 \div 3 =$
$15 \div 3 =$	$12 \div 3 =$	$9 \div 3 =$
$6 \div 3 =$	$3 \div 3 =$	





	$40 \div 4 =$	$36 \div 4 =$
$32 \div 4 =$	$28 \div 4 =$	$24 \div 4 =$
$20 \div 4 =$	$16 \div 4 =$	$12 \div 4 =$
$8 \div 4 =$	$4 \div 4 =$	





Counters and dice are required to play.

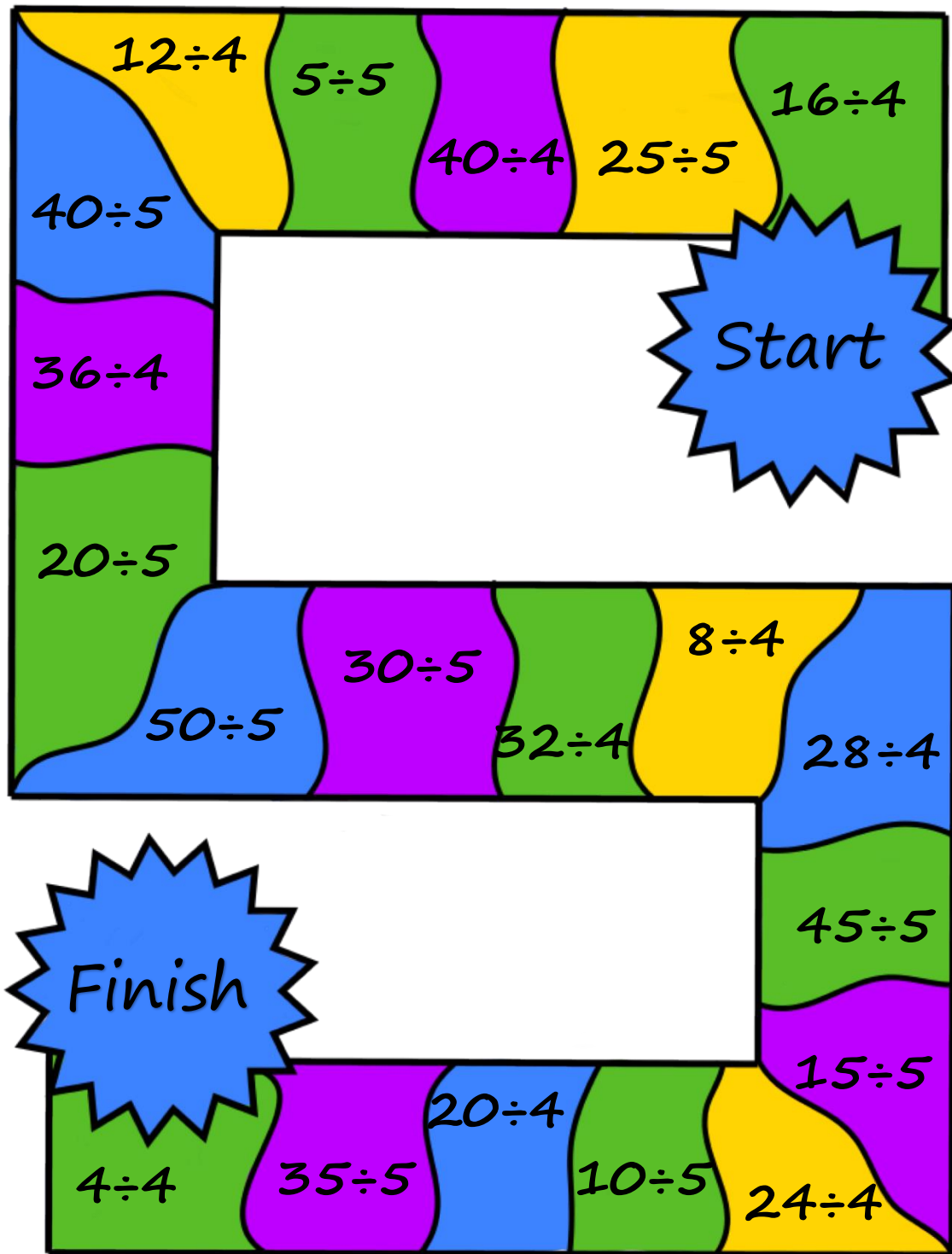


Solve the problems.

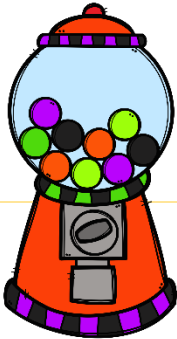
	$50 \div 5 =$	$45 \div 5 =$
$40 \div 5 =$	$35 \div 5 =$	$30 \div 5 =$
$25 \div 5 =$	$20 \div 5 =$	$15 \div 5 =$
$10 \div 5 =$	$5 \div 5 =$	

	$60 \div 6 =$	$54 \div 6 =$
$48 \div 6 =$	$42 \div 6 =$	$36 \div 6 =$
$30 \div 6 =$	$24 \div 6 =$	$18 \div 6 =$
$12 \div 6 =$	$6 \div 6 =$	

Counters and dice are required to play.



Solve the problems.



	$70 \div 7 =$	$63 \div 7 =$
$56 \div 7 =$	$49 \div 7 =$	$42 \div 7 =$
$35 \div 7 =$	$28 \div 7 =$	$21 \div 7 =$
$14 \div 7 =$	$7 \div 7 =$	

	$80 \div 8 =$	$72 \div 8 =$
$64 \div 8 =$	$56 \div 8 =$	$48 \div 8 =$
$40 \div 8 =$	$32 \div 8 =$	$24 \div 8 =$
$16 \div 8 =$	$8 \div 8 =$	



Solve the problems.




	$90 \div 9 =$	$81 \div 9 =$
$72 \div 9 =$	$63 \div 9 =$	$54 \div 9 =$
$45 \div 9 =$	$36 \div 9 =$	$27 \div 9 =$
$18 \div 9 =$	$9 \div 9 =$	

	$100 \div 10 =$	$90 \div 10 =$
$80 \div 10 = 8$	$70 \div 10 =$	$60 \div 10 =$
$50 \div 10 =$	$40 \div 10 =$	$30 \div 10 =$
$20 \div 10 =$	$10 \div 10 =$	



Solve the problems.

$\begin{array}{r} 937 \\ -875 \\ \hline \end{array}$	$\begin{array}{r} 836 \\ -689 \\ \hline \end{array}$	$\begin{array}{r} 624 \\ -185 \\ \hline \end{array}$
$\begin{array}{r} 957 \\ -496 \\ \hline \end{array}$	$\begin{array}{r} 785 \\ -595 \\ \hline \end{array}$	$\begin{array}{r} 274 \\ -189 \\ \hline \end{array}$



Write the correct number of ten thousands, thousands, hundreds, tens, and ones.


	Ten Thousands	Thousands	Hundreds	Tens	Ones
58,205					
85,173					
40,377					
72,495					

Solve the problems.

$\begin{array}{r} 592 \\ -477 \\ \hline \end{array}$	$\begin{array}{r} 495 \\ -188 \\ \hline \end{array}$	$\begin{array}{r} 846 \\ -297 \\ \hline \end{array}$
$\begin{array}{r} 739 \\ -279 \\ \hline \end{array}$	$\begin{array}{r} 992 \\ -899 \\ \hline \end{array}$	$\begin{array}{r} 751 \\ -598 \\ \hline \end{array}$

Learn the roman numerals.

1	I	20	XX
2	II	30	XXX
3	III	40	XL
4	IV	50	L
5	V	60	LX
6	VI	70	LXX
7	VII	80	LXXX
8	VIII	90	XC
9	IX	100	C
10	X	500	D
		1,000	M



Solve the problems.

$\begin{array}{r} 749 \\ -364 \\ \hline \end{array}$	$\begin{array}{r} 576 \\ -397 \\ \hline \end{array}$	$\begin{array}{r} 486 \\ -299 \\ \hline \end{array}$
$\begin{array}{r} 853 \\ -488 \\ \hline \end{array}$	$\begin{array}{r} 937 \\ -587 \\ \hline \end{array}$	$\begin{array}{r} 385 \\ -197 \\ \hline \end{array}$

Write the correct number of ten thousands, thousands, hundreds, tens, and ones.

	Ten Thousands	Thousands	Hundreds	Tens	Ones
83,593					
29,476					
84,559					
29,285					

Write the correct roman numerals.

22		100	
10		240	
5		500	
55		1,000	
78		130	

Multiply.

$\begin{array}{r} 4 \\ \times 0 \\ \hline \end{array}$	$\begin{array}{r} 4 \\ \times 1 \\ \hline \end{array}$	$\begin{array}{r} 4 \\ \times 2 \\ \hline \end{array}$
$\begin{array}{r} 4 \\ \times 3 \\ \hline \end{array}$	$\begin{array}{r} 4 \\ \times 4 \\ \hline \end{array}$	$\begin{array}{r} 4 \\ \times 5 \\ \hline \end{array}$
$\begin{array}{r} 4 \\ \times 6 \\ \hline \end{array}$	$\begin{array}{r} 4 \\ \times 7 \\ \hline \end{array}$	$\begin{array}{r} 4 \\ \times 8 \\ \hline \end{array}$
$\begin{array}{r} 4 \\ \times 9 \\ \hline \end{array}$	$\begin{array}{r} 4 \\ \times 10 \\ \hline \end{array}$	

Circle the numbers in the ten thousands place.

37,649 28,461 96,384 46,170

Write the correct roman numerals.

23		120	
16		304	
7		510	
25		1,000	
90		900	

Multiply.

$\begin{array}{r} 3 \\ \times 6 \\ \hline \end{array}$	$\begin{array}{r} 4 \\ \times 2 \\ \hline \end{array}$	$\begin{array}{r} 3 \\ \times 8 \\ \hline \end{array}$
$\begin{array}{r} 4 \\ \times 5 \\ \hline \end{array}$	$\begin{array}{r} 3 \\ \times 9 \\ \hline \end{array}$	$\begin{array}{r} 4 \\ \times 1 \\ \hline \end{array}$

Solve the problems.

	$20 \div 2 =$	$18 \div 2 =$
$16 \div 2 =$	$14 \div 2 =$	$12 \div 2 =$
$10 \div 2 =$	$8 \div 2 =$	$6 \div 2 =$
$4 \div 2 =$	$2 \div 2 =$	

Circle the numbers in the ten thousands place.

47,625 24,673 13,374 45,267

Color the fractions.



Solve the problems.

	$30 \div 3 =$	$27 \div 3 =$
$24 \div 3 =$	$21 \div 3 =$	$18 \div 3 =$
$15 \div 3 =$	$12 \div 3 =$	$9 \div 3 =$
$6 \div 3 =$	$3 \div 3 =$	

Multiply.

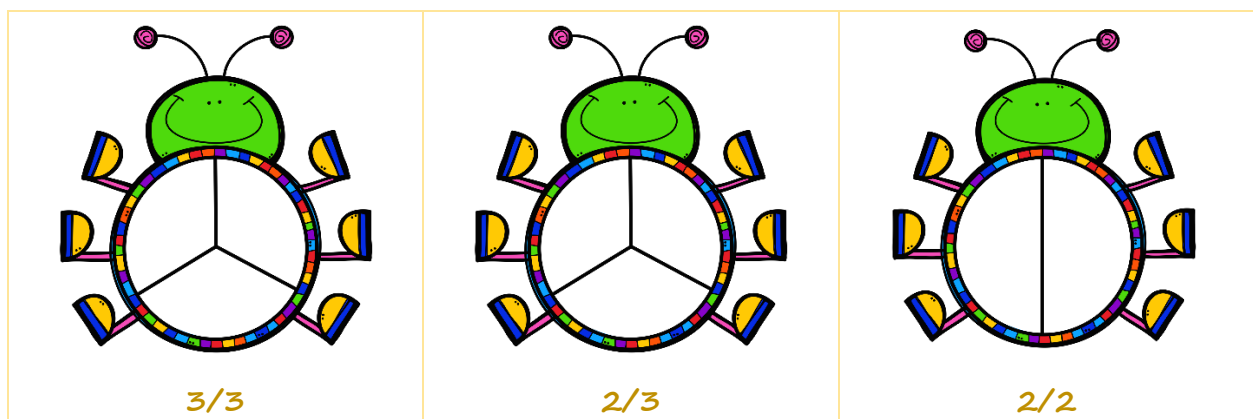
$\begin{array}{r} 5 \\ \times 0 \\ \hline \end{array}$	$\begin{array}{r} 5 \\ \times 1 \\ \hline \end{array}$	$\begin{array}{r} 5 \\ \times 2 \\ \hline \end{array}$
$\begin{array}{r} 5 \\ \times 3 \\ \hline \end{array}$	$\begin{array}{r} 5 \\ \times 4 \\ \hline \end{array}$	$\begin{array}{r} 5 \\ \times 5 \\ \hline \end{array}$
$\begin{array}{r} 5 \\ \times 6 \\ \hline \end{array}$	$\begin{array}{r} 5 \\ \times 7 \\ \hline \end{array}$	$\begin{array}{r} 5 \\ \times 8 \\ \hline \end{array}$
$\begin{array}{r} 5 \\ \times 9 \\ \hline \end{array}$	$\begin{array}{r} 5 \\ \times 10 \\ \hline \end{array}$	

Solve the problems.

	$40 \div 4 =$	$36 \div 4 =$
$32 \div 4 =$	$28 \div 4 =$	$24 \div 4 =$
$20 \div 4 =$	$16 \div 4 =$	$12 \div 4 =$
$8 \div 4 =$	$4 \div 4 =$	




Color the fractions.



Solve the problems.

$\begin{array}{r} 74,754 \\ +38,633 \\ \hline \end{array}$	$\begin{array}{r} 98,264 \\ +22,650 \\ \hline \end{array}$	$\begin{array}{r} 35,688 \\ +11,973 \\ \hline \end{array}$
$\begin{array}{r} 75,951 \\ +27,889 \\ \hline \end{array}$	$\begin{array}{r} 17,296 \\ +82,294 \\ \hline \end{array}$	$\begin{array}{r} 57,857 \\ +25,683 \\ \hline \end{array}$
$\begin{array}{r} 68,356 \\ +39,592 \\ \hline \end{array}$	$\begin{array}{r} 16,240 \\ +86,206 \\ \hline \end{array}$	$\begin{array}{r} 38,562 \\ +39,036 \\ \hline \end{array}$
$\begin{array}{r} 97,374 \\ +25,502 \\ \hline \end{array}$	$\begin{array}{r} 23,958 \\ +85,496 \\ \hline \end{array}$	$\begin{array}{r} 27,973 \\ +96,067 \\ \hline \end{array}$
$\begin{array}{r} 65,204 \\ +87,097 \\ \hline \end{array}$	$\begin{array}{r} 75,830 \\ +22,877 \\ \hline \end{array}$	$\begin{array}{r} 68,483 \\ +92,867 \\ \hline \end{array}$


What will the clock look like?



Multiply.

$\begin{array}{r} 1 \\ \times 0 \\ \hline \end{array}$	$\begin{array}{r} 1 \\ \times 1 \\ \hline \end{array}$	$\begin{array}{r} 1 \\ \times 2 \\ \hline \end{array}$
$\begin{array}{r} 1 \\ \times 3 \\ \hline \end{array}$	$\begin{array}{r} 1 \\ \times 4 \\ \hline \end{array}$	$\begin{array}{r} 1 \\ \times 5 \\ \hline \end{array}$
$\begin{array}{r} 1 \\ \times 6 \\ \hline \end{array}$	$\begin{array}{r} 1 \\ \times 7 \\ \hline \end{array}$	$\begin{array}{r} 1 \\ \times 8 \\ \hline \end{array}$
$\begin{array}{r} 1 \\ \times 9 \\ \hline \end{array}$	$\begin{array}{r} 1 \\ \times 10 \\ \hline \end{array}$	


What will the clock look like?



Solve the problems.

$\begin{array}{r} 48,596 \\ +37,495 \\ \hline \end{array}$	$\begin{array}{r} 28,491 \\ +38,192 \\ \hline \end{array}$	$\begin{array}{r} 28,385 \\ +28,459 \\ \hline \end{array}$
$\begin{array}{r} 94,378 \\ +78,527 \\ \hline \end{array}$	$\begin{array}{r} 38,456 \\ +34,567 \\ \hline \end{array}$	$\begin{array}{r} 37,217 \\ +46,592 \\ \hline \end{array}$




What will the clock look like?



Multiply.

$\begin{array}{r} 2 \\ \times 0 \\ \hline \end{array}$	$\begin{array}{r} 2 \\ \times 1 \\ \hline \end{array}$	$\begin{array}{r} 2 \\ \times 2 \\ \hline \end{array}$
$\begin{array}{r} 2 \\ \times 3 \\ \hline \end{array}$	$\begin{array}{r} 2 \\ \times 4 \\ \hline \end{array}$	$\begin{array}{r} 2 \\ \times 5 \\ \hline \end{array}$
$\begin{array}{r} 2 \\ \times 6 \\ \hline \end{array}$	$\begin{array}{r} 2 \\ \times 7 \\ \hline \end{array}$	$\begin{array}{r} 2 \\ \times 8 \\ \hline \end{array}$
$\begin{array}{r} 2 \\ \times 9 \\ \hline \end{array}$	$\begin{array}{r} 2 \\ \times 10 \\ \hline \end{array}$	

What will the clock look like?

3:42	8:13	9:22
		

Multiply.

$\begin{array}{r} 3 \\ \times 0 \\ \hline \end{array}$	$\begin{array}{r} 3 \\ \times 1 \\ \hline \end{array}$	$\begin{array}{r} 3 \\ \times 2 \\ \hline \end{array}$
$\begin{array}{r} 3 \\ \times 3 \\ \hline \end{array}$	$\begin{array}{r} 3 \\ \times 4 \\ \hline \end{array}$	$\begin{array}{r} 3 \\ \times 5 \\ \hline \end{array}$
$\begin{array}{r} 3 \\ \times 6 \\ \hline \end{array}$	$\begin{array}{r} 3 \\ \times 7 \\ \hline \end{array}$	$\begin{array}{r} 3 \\ \times 8 \\ \hline \end{array}$
$\begin{array}{r} 3 \\ \times 9 \\ \hline \end{array}$	$\begin{array}{r} 3 \\ \times 10 \\ \hline \end{array}$	

Circle the numbers in the hundred thousands place.

237,649 628,461 796,384 146,170

Solve the problems.

$\begin{array}{r} 485 \\ -184 \\ \hline \end{array}$	$\begin{array}{r} 384 \\ -297 \\ \hline \end{array}$	$\begin{array}{r} 834 \\ -678 \\ \hline \end{array}$
$\begin{array}{r} 374 \\ -198 \\ \hline \end{array}$	$\begin{array}{r} 987 \\ -199 \\ \hline \end{array}$	$\begin{array}{r} 912 \\ -765 \\ \hline \end{array}$

$\begin{array}{r} 4 \\ \times 0 \\ \hline \end{array}$	$\begin{array}{r} 4 \\ \times 1 \\ \hline \end{array}$	$\begin{array}{r} 4 \\ \times 2 \\ \hline \end{array}$
$\begin{array}{r} 4 \\ \times 3 \\ \hline \end{array}$	$\begin{array}{r} 4 \\ \times 4 \\ \hline \end{array}$	$\begin{array}{r} 4 \\ \times 5 \\ \hline \end{array}$
$\begin{array}{r} 4 \\ \times 6 \\ \hline \end{array}$	$\begin{array}{r} 4 \\ \times 7 \\ \hline \end{array}$	$\begin{array}{r} 4 \\ \times 8 \\ \hline \end{array}$
$\begin{array}{r} 4 \\ \times 9 \\ \hline \end{array}$	$\begin{array}{r} 4 \\ \times 10 \\ \hline \end{array}$	

Circle the numbers in the hundred thousands place.

384,285 485,182 964,294 184,937

Solve the problems.

$\begin{array}{r} 485 \\ -184 \\ \hline \end{array}$	$\begin{array}{r} 384 \\ -297 \\ \hline \end{array}$	$\begin{array}{r} 834 \\ -678 \\ \hline \end{array}$
$\begin{array}{r} 374 \\ -198 \\ \hline \end{array}$	$\begin{array}{r} 987 \\ -199 \\ \hline \end{array}$	$\begin{array}{r} 912 \\ -765 \\ \hline \end{array}$

$\begin{array}{r} 5 \\ \times 0 \\ \hline \end{array}$	$\begin{array}{r} 5 \\ \times 1 \\ \hline \end{array}$	$\begin{array}{r} 5 \\ \times 2 \\ \hline \end{array}$
$\begin{array}{r} 5 \\ \times 3 \\ \hline \end{array}$	$\begin{array}{r} 5 \\ \times 4 \\ \hline \end{array}$	$\begin{array}{r} 5 \\ \times 5 \\ \hline \end{array}$
$\begin{array}{r} 5 \\ \times 6 \\ \hline \end{array}$	$\begin{array}{r} 5 \\ \times 7 \\ \hline \end{array}$	$\begin{array}{r} 5 \\ \times 8 \\ \hline \end{array}$
$\begin{array}{r} 5 \\ \times 9 \\ \hline \end{array}$	$\begin{array}{r} 5 \\ \times 10 \\ \hline \end{array}$	

6	3	8,	5	9	3
---	---	----	---	---	---

Color the number in the hundreds place red.

Color the number in the thousands place blue.

Color the number in the tens place green.

Color the number in the ones place brown.

Color the number in the ten thousands place orange.

Color the number in the hundred thousands place purple.

Solve the problems.

	$20 \div 2 =$	$18 \div 2 =$
$16 \div 2 =$	$14 \div 2 =$	$12 \div 2 =$
$10 \div 2 =$	$8 \div 2 =$	$6 \div 2 =$
$4 \div 2 =$	$2 \div 2 =$	

Solve the problems.

	$30 \div 3 =$	$27 \div 3 =$
$24 \div 3 =$	$21 \div 3 =$	$18 \div 3 =$
$15 \div 3 =$	$12 \div 3 =$	$9 \div 3 =$
$6 \div 3 =$	$3 \div 3 =$	

3	6	1,	0	5	7
---	---	----	---	---	---

1. Color the number in the hundreds place red.
2. Color the number in the thousands place blue.
3. Color the number in the tens place green.
4. Color the number in the ones place brown.
5. Color the number in the ten thousands place orange.
6. Color the number in the hundred thousands place purple.

Solve the problems.

	$40 \div 4 =$	$36 \div 4 =$
$32 \div 4 =$	$28 \div 4 =$	$24 \div 4 =$
$20 \div 4 =$	$16 \div 4 =$	$12 \div 4 =$
$8 \div 4 =$	$4 \div 4 =$	

My mom bought 2 dozen cupcakes. How many cupcakes did she buy in all?



Solve the problems.

	$50 \div 5 =$	$45 \div 5 =$
$40 \div 5 =$	$35 \div 5 =$	$30 \div 5 =$
$25 \div 5 =$	$20 \div 5 =$	$15 \div 5 =$
$10 \div 5 =$	$5 \div 5 =$	

Jack baked 10 cookies and he wants to share with his sister. How many cookies will they get?



Solve the problems.


Josh's birthday was 4 weeks ago. How many days are in 4 weeks?

Sam is baking cupcakes; the recipe makes 6 cupcakes. If she doubles the recipe, how many cupcakes will she bake?



Solve the problems.

Chris has 3 non-fiction books and 3 fiction books. How many books does he have in all?



Jane bought 30 marbles for her 3 kids. How many marbles are each of them going to get?



I want to give a big thanks to Creative Clips Clipart, and to Growing Smart Readers, and Sticky Foot Studio for their awesome clipart incorporated to this work. Please visit their store:

<https://www.teacherspayteachers.com/Store/Krista-Wallden-Creative-Clips>



<https://www.teacherspayteachers.com/Store/Growing-Smart-Readers>



<https://www.teacherspayteachers.com/Store/Sticky-Foot-Studio>

